

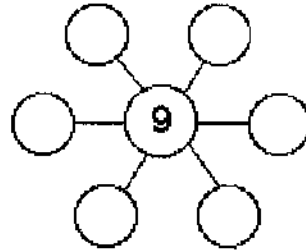
SUNSHINE MATH-1

Venus, XVI

Name: _____

(This shows my own thinking.)

- ★★★ 1. Put 2, 3, 4, 6, 7 and 8 in the circles so that the sum along each line is 19. Use each number just once.



- ★★★ 2. Use the calendar to answer the questions.

January						
Sun	Mon	Tue	Wed	Thu	Fri	Sat
	1	2	3	4	5	6
7	8	9	10	11	12	13
14	15	16	17	18	19	20
21	22	23	24	25	26	27
28	29	30	31			


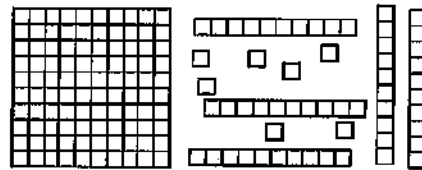
What date is the second Wednesday of the month?
 Answer: _____

How many Saturdays are in January?
 Answer: _____

What date is two days before the fourth Thursday?
 Answer: _____

- ★ 3. What numeral do the number blocks show?

Answer: _____



- ★ 4. Draw a pencil that is 3 centimeters shorter than the one above:



Draw it here:

** 5. On a number line,


a. is 13 closer to 10 or 20?

Answer: _____

b. is 28 closer to 20 or 30?

Answer: _____

**** 6. Use the picture graph about a class to answer the questions.



How many people like art best?

Answer: _____

How many more people like music than reading?

Answer: _____

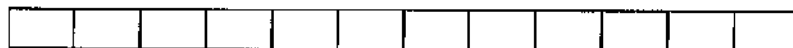
How many boys and how many girls are in the class?

Answer: ___ boys and ___ girls

key: ☺ = 2 boys

☺ = 2 girls

★ 7. How long is the pencil? Each box is 1 centimeter long.



Answer: _____ centimeters