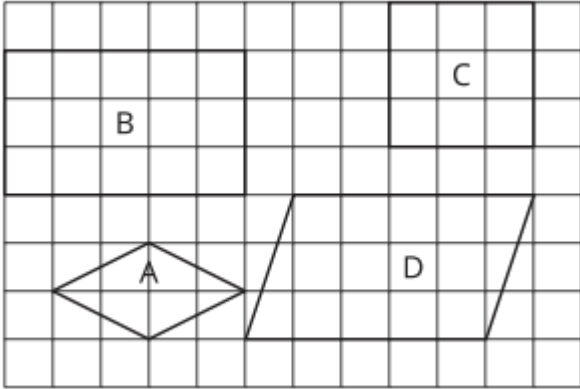


Unit 7- Pre-Unit Problems

1.

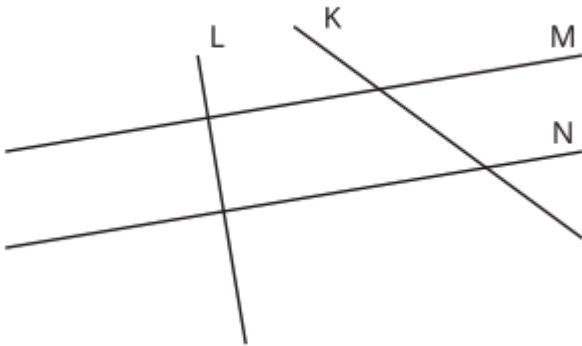


a. Which shapes are rectangles?

b. Which shapes are rhombuses?

c. Which shapes are squares?


2.



a. Name two lines in the drawing that are parallel.

b. Name two lines in the drawing that are perpendicular.

3. a. Draw a rectangle on the grid.



b. What is the perimeter of the rectangle?

4.

Which of the triangles are right triangles?

