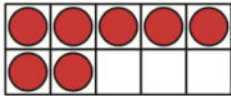
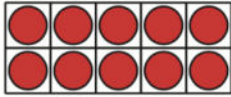
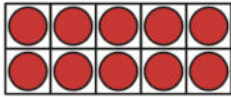


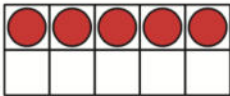




Unit 5 - Pre-Unit Problems

1. How many dots do you see?


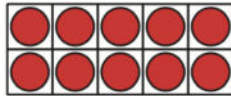

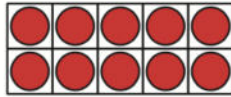
a.



b.



c.



A. There are 9 ducks in the pond. There are 7 ducks on the grass. How many ducks are on the pond and in the grass? Show your thinking using drawings, numbers or words.

2. Find the number that makes each equation true.

a. $10 + \square = 18$

b. $17 - \square = 7$

c. $9 + 8 = \square$

d. $19 = \square + 14$