

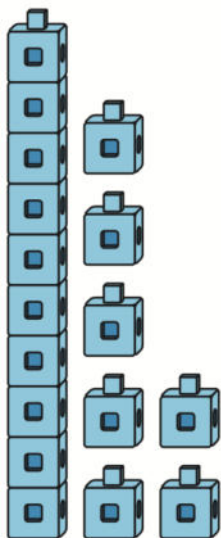
Unit 4 - Pre-Unit Problems

1. a. Mai says the numbers 10, 20, 30. What is Mai counting by?


b. What is the next number Mai will say?

2. How many are in each picture?

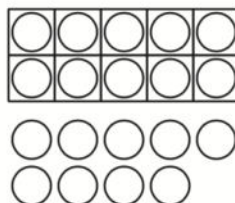
a.



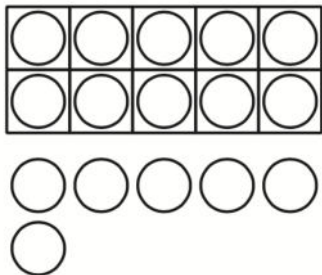
b.



c.



3. Which expression shows the number of dots?



- A. $5 + 1$
- B. $10 + 5$
- C. $10 + 6$

4. Find the number that makes each equation true.

a. $10 + 7 = \square$

b. $10 + \square = 15$

c. $\square + 3 = 13$

