

Directions: Answer the following question(s).

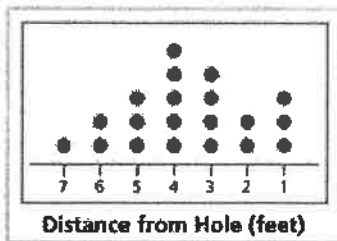
- 1 Matt's beach bucket contains 250 grams of sand. He adds 130 grams of sand to the bucket. How many grams of sand are in the bucket now?

A. 120 grams  
B. 130 grams  
C. 250 grams  
D. 380 grams

- 2 Betty has 10 cups of flour. She uses 2 cups to bake a loaf of bread. How many cups of flour does she have now?

A. 2 cups  
B. 8 cups  
C. 10 cups  
D. 12 cups

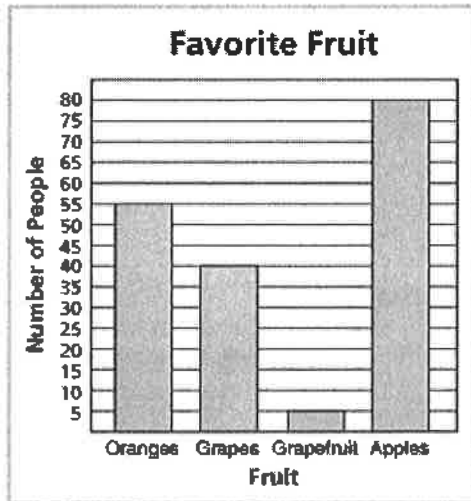
- 3 Bill measured the distances some golf balls were away from the hole on a miniature golf course. The results are shown in the line plot. How many golf balls were 4 feet from the hole?



A. 6  
B. 5  
C. 4  
D. 3

Directions: Answer the following question(s).

- 4 The bar graph shows the results of a survey of favorite fruits. How many more people chose apples than chose grapefruit?



- A. 15  
 B. 35  
 C. 75  
 D. 80

- 5 What time is shown on the clock?



- A. 6:57  
 B. 7:03  
 C. 11:34  
 D. 12:26

Directions: Answer the following question(s).

6

What is the length of the carrot measured to the nearest  $\frac{1}{4}$  inch?



- A. 3 inches  
 B.  $3\frac{1}{2}$  inches  
 C. 4 inches  
 D.  $4\frac{1}{2}$  inches

7

What time is shown on the clock?



- A. 3:11  
 B. 3:56  
 C. 11:03  
 D. 11:16

8

What time is shown on the clock?



- A. 9:12  
 B. 9:59  
 C. 11:45  
 D. 11:59

9

Which is the best estimate of the weight of a bowling ball?

- A. 120 pounds  
 B. 12 pounds  
 C. 120 ounces  
 D. 12 ounces

Directions: Answer the following question(s).

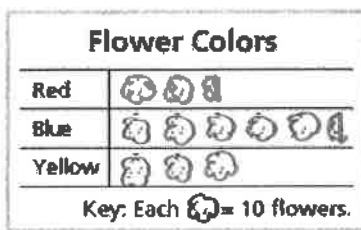
10 Which is the best estimate of the amount of milk in a glass?

- A. 250 milliliters
- B. 250 liters
- C. 25 milliliters
- D. 25 liters

11 Which is the best estimate of the mass of a car?

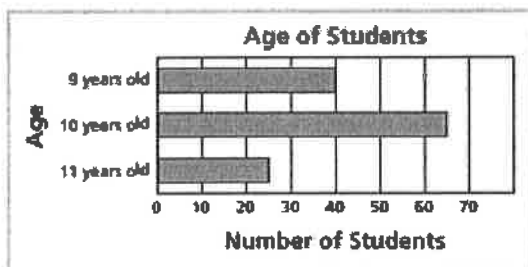
- A. 150 grams
- B. 150 kilograms
- C. 1,500 grams
- D. 1,500 kilograms

12 How many flowers are red?



- A. 2
- B. 25
- C. 20
- D. 30

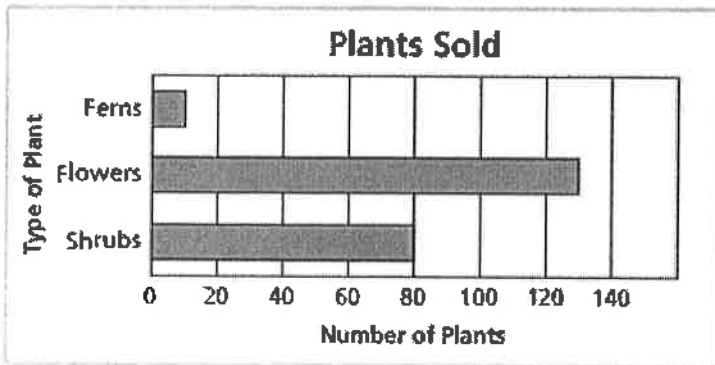
13 How many students are 10 years old?



- A. 40
- B. 60
- C. 65
- D. 75

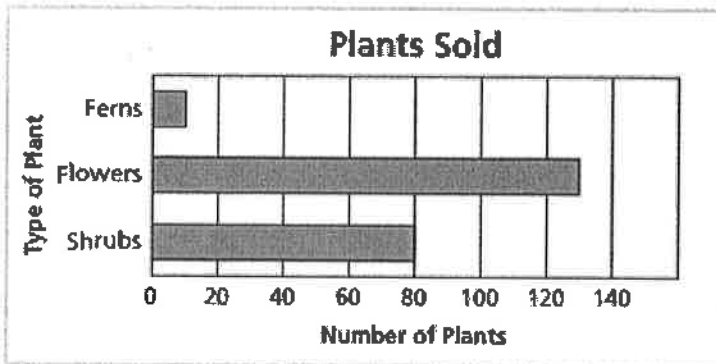
Directions: Answer the following question(s).

14 How many more flowers were sold than shrubs?



- A. 40
- B. 45
- C. 50
- D. 130

15 What was the total number of plants sold?



- A. 10
- B. 80
- C. 130
- D. 220

16 Aisha left her house at 1:30 P.M. and drove 45 minutes to a local mall to shop. She shopped for 20 minutes and then drove 45 minutes to get home. How long was she away from home?

- A. 80 minutes
- B. 90 minutes
- C. 100 minutes
- D. 110 minutes

17 Melissa finished her 50-minute daily run at 8:30 A.M. What time did she start her run?

- A. 7:40 A.M.
- B. 7:50 A.M.
- C. 9:10 A.M.
- D. 9:20 A.M.

Directions: Answer the following question(s).


- 18 Betsy needs 200 milliliters of lemonade to fill a small jar. How many milliliters of lemonade does she need to fill 6 jars of the same size?

A. 200 milliliters  
 B. 206 milliliters  
 C. 600 milliliters  
 D. 1,200 milliliters

- 19 A playing card has a mass of about 2 grams. Approximately how many grams is a deck of 52 playing cards?

A. 2 grams  
 B. 52 grams  
 C. 54 grams  
 D. 104 grams

- 20 Brandon collected leaves for his biology class and measured their lengths. The results are shown in the line plot. How many leaves were shorter than  $3\frac{1}{2}$  inches long?



A. 3  
 B. 8  
 C. 12  
 D. 16