


Unit 3 - Pre-Unit Problems

1. For each picture, write the number for how many you see.

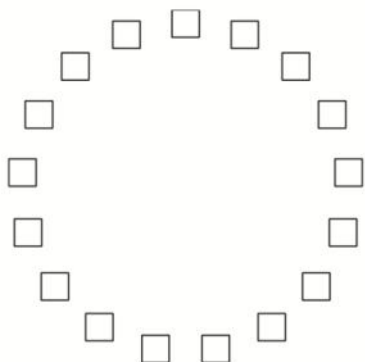
a.




b.



c.




2. Match each picture with an expression.




$10 + 8$




$5 + 4$



$10 + 4$



$10 + 6$



3. There were 5 monkeys swinging in the tree. Then 2 more monkeys came to join them. How many monkeys are in the tree now? Show your thinking using drawings, numbers or words.