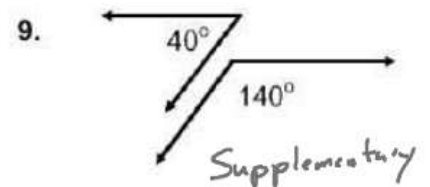
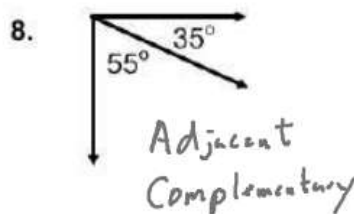
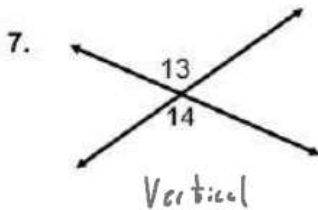
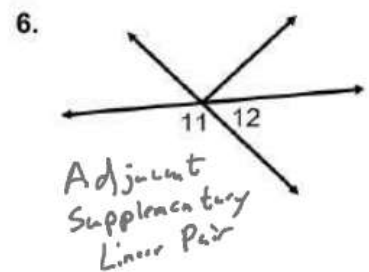

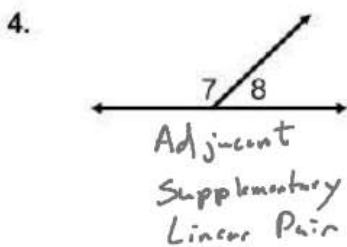
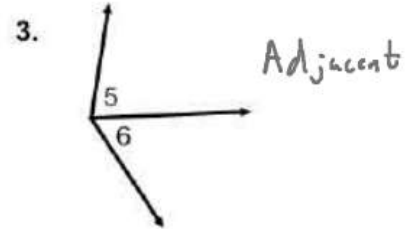
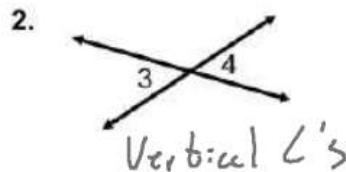
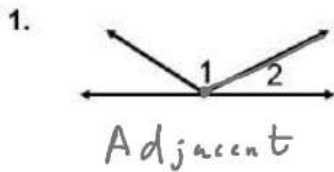


Identify each pair of angles as adjacent, vertical, complementary, supplementary, and/or a linear pair.



Use the figure at the right to answer each question.

10. Name two acute vertical angles.

$\angle DGC + \angle EGF$

11. Name two obtuse vertical angles.

$\angle EGD + \angle FGC$

12. Name a pair of adjacent angles

13. Name a linear pair.

14. Name a pair of complementary angles.

15. Name an angle supplementary to $\angle FGE$

