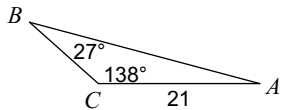


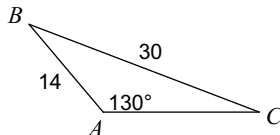
Quiz-Law of Sines and Cosines

Find each measurement indicated. Round your answers to the nearest tenth.

1) Find AB

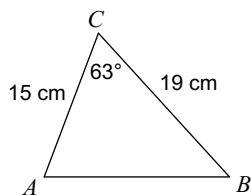


2) Find $m\angle C$



Solve each triangle. Round your answers to the nearest tenth.

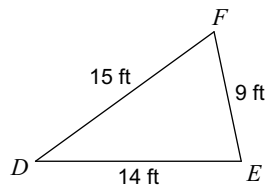
3)



4) $m\angle A = 137^\circ$, $c = 12$, $a = 28$

Find the area of each triangle to the nearest tenth.

5)



6)

