


# Brain Teaser

- The dog's water dish had 24 milliliters of water. The owner added water so that there was 4 times that amount. The dog drank 33 milliliters of that water. How much water was left in the dish?




# Brain Teaser

- Akambi is building a rock wall. He has used 14 rocks that each have a mass of about 5 kilograms. Now he adds a rock that has a mass of 12 kilograms. What is the mass of the rocks that Akambi has used so far?



# Brain Teaser

- There were 5 turtles sitting on one side of a pan balance scale. Together, the turtles had a mass of 236 grams. One turtle with a mass of 25 grams got off the balance and a different turtle with a mass of 47 grams got on. Now, how much mass do the 5 turtles on the balance have?



# Brain Teaser

- Ms. Wyatt is four times taller than her dog, Finney. Finney is 56 centimeters tall. How tall is Ms. Wyatt when she is wearing shoes that are 5 centimeters tall?




# Brain Teaser

- After a long hike, Ms. James was tired and thirsty. She grabbed her water bottle that had 179 ml of water in it. She drank 97 ml. As she drank, she spilled 23 ml. How much water was left in the bottle?



# Brain Teaser

- Ms. Stephens was hungry. She had 3 apple trees in her garden. There were 7 apples on each tree. She took 10 bites of each apple on each tree. How many bites did Ms. Stephens take?



# Brain Teaser

- The mama monkey collected 28 kilograms of bananas. She ate 4 kilograms. Then, she divided the rest between her 4 babies. How many kilograms of bananas did each baby get?



# Brain Teaser

- A Zebra found a pool of water with about 500 liters of water. He drank 22 liters of water. Then, he jumped in the pool and took a bath. When he finished, there were only 296 liters of water left. How much water splashed out while he was in his bath?





# Brain Teaser

- The monkey loves to swing from tree branch to tree branch. On Monday, he swung 287 meters. On Tuesday he was tired and only swung 26 meters. On Wednesday, he swung 5 times as far as he swung on Tuesday. How far did the monkey swing on Monday, Tuesday, and Wednesday all together?



# Brain Teaser

- There are 5 puppies and each puppy has a mass of about 6 kilograms. The mother dog has a mass that is 3 times as much as **one** of her puppies. How much mass do all **5 dogs—the 4 puppies and their mother**—have together?

