



**First Grade**

**Math Materials**

**Dual Immersion**

Name \_\_\_\_\_

Date \_\_\_\_\_

## Core Addition Fluency Review

1.  $2 + 0 = \underline{\quad}$

2.  $2 + 1 = \underline{\quad}$

3.  $2 + 2 = \underline{\quad}$

4.  $4 + 0 = \underline{\quad}$

5.  $0 + 4 = \underline{\quad}$

6.  $0 + 3 = \underline{\quad}$

7.  $0 + 0 = \underline{\quad}$

8.  $3 + 1 = \underline{\quad}$

9.  $1 + 3 = \underline{\quad}$

10.  $1 + 4 = \underline{\quad}$

11.  $1 + 5 = \underline{\quad}$

12.  $5 + 1 = \underline{\quad}$

13.  $1 + 7 = \underline{\quad}$

14.  $7 + 1 = \underline{\quad}$

15.  $1 + 8 = \underline{\quad}$

16.  $1 + 6 = \underline{\quad}$

17.  $6 + 1 = \underline{\quad}$

18.  $6 + 2 = \underline{\quad}$

19.  $5 + 2 = \underline{\quad}$

20.  $4 + 3 = \underline{\quad}$

21.  $2 + 3 = \underline{\quad}$

22.  $2 + 4 = \underline{\quad}$

23.  $4 + 2 = \underline{\quad}$

24.  $3 + 2 = \underline{\quad}$

25.  $9 + 1 = \underline{\quad}$

26.  $8 + 2 = \underline{\quad}$

27.  $7 + 2 = \underline{\quad}$

28.  $7 + 3 = \underline{\quad}$

29.  $6 + 3 = \underline{\quad}$

30.  $6 + 4 = \underline{\quad}$

31.  $5 + 3 = \underline{\quad}$

32.  $3 + 5 = \underline{\quad}$

33.  $3 + 4 = \underline{\quad}$

34.  $3 + 3 = \underline{\quad}$

35.  $4 + 4 = \underline{\quad}$

36.  $5 + 4 = \underline{\quad}$

37.  $4 + 6 = \underline{\quad}$

38.  $2 + 7 = \underline{\quad}$

39.  $2 + 8 = \underline{\quad}$

40.  $2 + 5 = \underline{\quad}$

41.  $5 + 5 = \underline{\quad}$

42.  $4 + 5 = \underline{\quad}$


43.  $2 + 6 = \underline{\quad}$

44.  $3 + 6 = \underline{\quad}$

45.  $3 + 7 = \underline{\quad}$

**A**

Number correct:



Name \_\_\_\_\_

Date \_\_\_\_\_

\*Write the missing number.

1	$10 + 3 = \square$		16	$10 + \square = 11$	
2	$10 + 2 = \square$		17	$10 + \square = 12$	
3	$10 + 1 = \square$		18	$5 + \square = 15$	
4	$1 + 10 = \square$		19	$4 + \square = 14$	
5	$4 + 10 = \square$		20	$\square + 10 = 17$	
6	$6 + 10 = \square$		21	$17 - \square = 7$	
7	$10 + 7 = \square$		22	$16 - \square = 6$	
8	$8 + 10 = \square$		23	$18 - \square = 8$	
9	$12 - 10 = \square$		24	$\square - 10 = 8$	
10	$11 - 10 = \square$		25	$\square - 10 = 9$	
11	$10 - 10 = \square$		26	$1 + 1 + 10 = \square$	
12	$13 - 10 = \square$		27	$2 + 2 + 10 = \square$	
13	$14 - 10 = \square$		28	$2 + 3 + 10 = \square$	
14	$15 - 10 = \square$		29	$4 + \square + 3 = 17$	
15	$18 - 10 = \square$		30	$\square + 5 + 10 = 18$	

**A**

Number correct:



Name \_\_\_\_\_

Date \_\_\_\_\_

\*Write the missing number. Pay attention to the addition or subtraction sign.

1	$5 + 1 = \square$		16	$29 + 10 = \square$	
2	$15 + 1 = \square$		17	$9 + 1 = \square$	
3	$25 + 1 = \square$		18	$19 + 1 = \square$	
4	$5 + 10 = \square$		19	$29 + 1 = \square$	
5	$15 + 10 = \square$		20	$39 + 1 = \square$	
6	$25 + 10 = \square$		21	$40 - 1 = \square$	
7	$8 - 1 = \square$		22	$30 - 1 = \square$	
8	$18 - 1 = \square$		23	$20 - 1 = \square$	
9	$28 - 1 = \square$		24	$20 + \square = 21$	
10	$38 - 1 = \square$		25	$20 + \square = 30$	
11	$38 - 10 = \square$		26	$27 + \square = 37$	
12	$28 - 10 = \square$		27	$27 + \square = 28$	
13	$18 - 10 = \square$		28	$\square + 10 = 34$	
14	$9 + 10 = \square$		29	$\square - 10 = 14$	
15	$19 + 10 = \square$		30	$\square - 10 = 24$	

Name \_\_\_\_\_

Date \_\_\_\_\_

**Core Subtraction Fluency Review**

1.  $8 - 0 = \underline{\quad}$

2.  $8 - 1 = \underline{\quad}$

3.  $7 - 7 = \underline{\quad}$

4.  $3 - 3 = \underline{\quad}$

5.  $3 - 2 = \underline{\quad}$

6.  $4 - 2 = \underline{\quad}$

7.  $5 - 2 = \underline{\quad}$

8.  $5 - 3 = \underline{\quad}$

9.  $9 - 2 = \underline{\quad}$

10.  $8 - 2 = \underline{\quad}$

11.  $7 - 2 = \underline{\quad}$

12.  $4 - 4 = \underline{\quad}$

13.  $4 - 3 = \underline{\quad}$

14.  $5 - 4 = \underline{\quad}$

15.  $8 - 3 = \underline{\quad}$

16.  $9 - 3 = \underline{\quad}$

17.  $10 - 3 = \underline{\quad}$

18.  $10 - 4 = \underline{\quad}$

19.  $10 - 2 = \underline{\quad}$

20.  $10 - 8 = \underline{\quad}$

21.  $10 - 7 = \underline{\quad}$

22.  $10 - 6 = \underline{\quad}$

23.  $6 - 6 = \underline{\quad}$

24.  $7 - 7 = \underline{\quad}$

25.  $7 - 6 = \underline{\quad}$

26.  $8 - 8 = \underline{\quad}$

27.  $8 - 7 = \underline{\quad}$

28.  $9 - 9 = \underline{\quad}$

28.  $9 - 8 = \underline{\quad}$

30.  $10 - 9 = \underline{\quad}$

31.  $5 - 5 = \underline{\quad}$

32.  $6 - 5 = \underline{\quad}$

33.  $7 - 5 = \underline{\quad}$

34.  $8 - 5 = \underline{\quad}$

35.  $8 - 4 = \underline{\quad}$

36.  $10 - 5 = \underline{\quad}$

37.  $9 - 5 = \underline{\quad}$

38.  $9 - 4 = \underline{\quad}$

39.  $6 - 3 = \underline{\quad}$

40.  $6 - 4 = \underline{\quad}$

41.  $7 - 3 = \underline{\quad}$

42.  $7 - 4 = \underline{\quad}$

43.  $8 - 6 = \underline{\quad}$

44.  $9 - 6 = \underline{\quad}$

45.  $9 - 7 = \underline{\quad}$





**A**

Number correct:



Name \_\_\_\_\_

Date \_\_\_\_\_

\*Write the missing number in the sequence.

1	0, 1, 2, __	16	15, __, 13, 12
2	10, 11, 12, __	17	__, 24, 23, 22
3	20, 21, 22, __	18	6, 16, __, 36
4	10, 9, 8, __	19	7, __, 27, 37
5	20, 19, 18, __	20	__, 19, 29, 39
6	40, 39, 38, __	21	__, 26, 16, 6
7	0, 10, 20, __	22	34, __, 14, 4
8	2, 12, 22, __	23	__, 20, 21, 22
9	5, 15, 25, __	24	29, __, 31, 32
10	40, 30, 20, __	25	5, __, 25, 35
11	39, 29, 19, __	26	__, 25, 15, 5
12	7, 8, 9, __	27	2, 4, __, 8
13	7, 8, __, 10	28	__, 14, 16, 18
14	17, __, 19, 20	29	8, __, 4, 2
15	15, 14, __, 12	30	__, 18, 16, 14

**B**

Number correct:




Name \_\_\_\_\_

Date \_\_\_\_\_

\*Write the missing number in the sequence.

1	1, 2, 3, ___		16	13, ___, 11, 10	
2	11, 12, 13 ___		17	___, 22, 21, 20	
3	21, 22, 23 ___		18	5, 15, ___, 35	
4	10, 9, 8, ___		19	4, ___, 24, 34	
5	20, 19, 18, ___		20	___, 17, 27, 37	
6	30, 29, 28, ___		21	___, 29, 19, 9	
7	0, 10, 20, ___		22	31, ___, 11, 1	
8	3, 13, 23, ___		23	___, 30, 31, 32	
9	6, 16, 26, ___		24	19, ___, 21, 22	
10	40, 30, 20, ___		25	5, ___, 25, 35	
11	38, 28, 18, ___		26	___, 25, 15, 5	
12	6, 7, 8, ___		27	2, 4, ___, 8	
13	6, 7, ___, 9		28	___, 12, 14, 16	
14	16, ___, 18, 19		29	12, ___, 8, 6	
15	16, ___, 14, 13		30	___, 20, 18, 16	

**A**

Number correct: 

Name \_\_\_\_\_

Date \_\_\_\_\_

\*Write the missing number. Pay attention to the + and - signs.

1	$3 + \square = 4$		16	$3 + \square = 7$	
2	$1 + \square = 4$		17	$7 = 4 + \square$	
3	$4 - 1 = \square$		18	$7 - 4 = \square$	
4	$4 - 3 = \square$		19	$7 - 3 = \square$	
5	$3 + \square = 5$		20	$3 + \square = 8$	
6	$2 + \square = 5$		21	$8 = 5 + \square$	
7	$5 - 2 = \square$		22	$\square = 8 - 5$	
8	$5 - 3 = \square$		23	$\square = 8 - 3$	
9	$4 + \square = 6$		24	$3 + \square = 9$	
10	$2 + \square = 6$		25	$9 = 6 + \square$	
11	$6 - 2 = \square$		26	$\square = 9 - 6$	
12	$6 - 4 = \square$		27	$\square = 9 - 3$	
13	$6 - 3 = \square$		28	$9 - 4 = \square + 2$	
14	$3 + \square = 6$		29	$\square + 3 = 9 - 3$	
15	$6 - \square = 3$		30	$\square - 7 = 8 - 6$	



Name \_\_\_\_\_

Date \_\_\_\_\_

**Core Addition Fluency Review: Missing Addends**

1.  $5 + \underline{\quad} = 5$

2.  $4 + \underline{\quad} = 5$

3.  $2 + \underline{\quad} = 5$

4.  $3 + \underline{\quad} = 5$

5.  $0 + \underline{\quad} = 5$

6.  $1 + \underline{\quad} = 5$

7.  $1 + \underline{\quad} = 6$

8.  $0 + \underline{\quad} = 6$

9.  $6 + \underline{\quad} = 6$

10.  $5 + \underline{\quad} = 6$

11.  $3 + \underline{\quad} = 6$

12.  $4 + \underline{\quad} = 6$

13.  $2 + \underline{\quad} = 6$

14.  $2 + \underline{\quad} = 7$

15.  $5 + \underline{\quad} = 7$

16.  $6 + \underline{\quad} = 7$

17.  $1 + \underline{\quad} = 7$

18.  $0 + \underline{\quad} = 7$

19.  $7 + \underline{\quad} = 7$

20.  $3 + \underline{\quad} = 7$

21.  $4 + \underline{\quad} = 7$

22.  $4 + \underline{\quad} = 8$

23.  $5 + \underline{\quad} = 8$

24.  $6 + \underline{\quad} = 8$

25.  $2 + \underline{\quad} = 8$

26.  $3 + \underline{\quad} = 8$

27.  $0 + \underline{\quad} = 8$

28.  $8 + \underline{\quad} = 8$

28.  $7 + \underline{\quad} = 8$

30.  $1 + \underline{\quad} = 8$

31.  $9 + \underline{\quad} = 9$

32.  $0 + \underline{\quad} = 9$

33.  $1 + \underline{\quad} = 9$

34.  $2 + \underline{\quad} = 9$

35.  $7 + \underline{\quad} = 9$

36.  $6 + \underline{\quad} = 9$

37.  $5 + \underline{\quad} = 9$

38.  $3 + \underline{\quad} = 9$

39.  $4 + \underline{\quad} = 9$

40.  $4 + \underline{\quad} = 10$

41.  $5 + \underline{\quad} = 10$

42.  $6 + \underline{\quad} = 10$


43.  $3 + \underline{\quad} = 10$

44.  $1 + \underline{\quad} = 10$

45.  $2 + \underline{\quad} = 10$

**A**

Number correct:



Name \_\_\_\_\_

Date \_\_\_\_\_

\*Write the missing number.

1	$6 + 1 = \square$		16	$6 + 3 = \square$	
2	$16 + 1 = \square$		17	$16 + 3 = \square$	
3	$26 + 1 = \square$		18	$26 + 3 = \square$	
4	$5 + 2 = \square$		19	$4 + 5 = \square$	
5	$15 + 2 = \square$		20	$15 + 4 = \square$	
6	$25 + 2 = \square$		21	$8 + 2 = \square$	
7	$5 + 3 = \square$		22	$18 + 2 = \square$	
8	$15 + 3 = \square$		23	$28 + 2 = \square$	
9	$25 + 3 = \square$		24	$8 + 3 = \square$	
10	$4 + 4 = \square$		25	$8 + 13 = \square$	
11	$14 + 4 = \square$		26	$8 + 23 = \square$	
12	$24 + 4 = \square$		27	$8 + 5 = \square$	
13	$5 + 4 = \square$		28	$8 + 15 = \square$	
14	$15 + 4 = \square$		29	$28 + \square = 33$	
15	$25 + 4 = \square$		30	$25 + \square = 33$	

**A**

Number correct:



Name \_\_\_\_\_

Date \_\_\_\_\_

\*Write the missing number. Pay attention to the + and - signs.

1	$2 + 2 = \square$		16	$2 + \square = 8$	
2	$2 + \square = 4$		17	$6 + \square = 8$	
3	$4 - 2 = \square$		18	$8 - 6 = \square$	
4	$3 + 3 = \square$		19	$8 - 2 = \square$	
5	$3 + \square = 6$		20	$9 + 2 = \square$	
6	$6 - 3 = \square$		21	$9 + \square = 11$	
7	$4 + \square = 7$		22	$11 - 9 = \square$	
8	$3 + \square = 7$		23	$9 + \square = 15$	
9	$7 - 3 = \square$		24	$15 - 9 = \square$	
10	$7 - 4 = \square$		25	$8 + \square = 15$	
11	$5 + 4 = \square$		26	$15 - \square = 8$	
12	$4 + \square = 9$		27	$8 + \square = 17$	
13	$9 - 4 = \square$		28	$17 - \square = 8$	
14	$9 - 5 = \square$		29	$27 - \square = 8$	
15	$9 - \square = 4$		30	$37 - \square = 8$	

Name \_\_\_\_\_

Date \_\_\_\_\_

## My Addition Practice

1. $6 + 0 = \underline{\quad}$	11. $7 + 1 = \underline{\quad}$	21. $5 + 3 = \underline{\quad}$
2. $0 + 6 = \underline{\quad}$	12. $\underline{\quad} = 1 + 7$	22. $\underline{\quad} = 5 + 4$
3. $5 + 1 = \underline{\quad}$	13. $3 + 3 = \underline{\quad}$	23. $6 + 4 = \underline{\quad}$
4. $1 + 5 = \underline{\quad}$	14. $3 + 4 = \underline{\quad}$	24. $4 + 6 = \underline{\quad}$
5. $6 + 1 = \underline{\quad}$	15. $\underline{\quad} = 3 + 5$	25. $\underline{\quad} = 4 + 4$
6. $1 + 6 = \underline{\quad}$	16. $6 + 3 = \underline{\quad}$	26. $3 + 4 = \underline{\quad}$
7. $6 + 2 = \underline{\quad}$	17. $7 + 3 = \underline{\quad}$	27. $5 + 5 = \underline{\quad}$
8. $5 + 2 = \underline{\quad}$	18. $\underline{\quad} = 7 + 2$	28. $\underline{\quad} = 4 + 5$
9. $2 + 5 = \underline{\quad}$	19. $2 + 7 = \underline{\quad}$	29. $3 + 7 = \underline{\quad}$
10. $2 + 4 = \underline{\quad}$	20. $2 + 8 = \underline{\quad}$	30. $\underline{\quad} = 3 + 6$

Today I finished \_\_\_\_\_ problems.

I solved \_\_\_\_\_ problems correctly.



Lesson 23:

Interpret two-digit numbers as tens and ones, including cases with more than 9 ones.

Date:

9/20/13

engage<sup>ny</sup>

4.F.9



Name \_\_\_\_\_

Date \_\_\_\_\_

## My Missing Addend Practice

1. $6 + \underline{\quad} = 6$	11. $3 + \underline{\quad} = 6$	21. $4 + \underline{\quad} = 7$
2. $0 + \underline{\quad} = 6$	12. $4 + \underline{\quad} = 8$	22. $7 = 3 + \underline{\quad}$
3. $5 + \underline{\quad} = 6$	13. $10 = 5 + \underline{\quad}$	23. $2 + \underline{\quad} = 7$
4. $4 + \underline{\quad} = 6$	14. $5 + \underline{\quad} = 9$	24. $2 + \underline{\quad} = 8$
5. $0 + \underline{\quad} = 7$	15. $5 + \underline{\quad} = 7$	25. $9 = 2 + \underline{\quad}$
6. $6 + \underline{\quad} = 7$	16. $8 = 5 + \underline{\quad}$	26. $2 + \underline{\quad} = 10$
7. $1 + \underline{\quad} = 7$	17. $5 + \underline{\quad} = 9$	27. $10 = 3 + \underline{\quad}$
8. $7 + \underline{\quad} = 8$	18. $8 + \underline{\quad} = 10$	28. $3 + \underline{\quad} = 9$
9. $1 + \underline{\quad} = 8$	19. $7 + \underline{\quad} = 10$	29. $4 + \underline{\quad} = 9$
10. $6 + \underline{\quad} = 8$	20. $10 = 6 + \underline{\quad}$	30. $10 = 4 + \underline{\quad}$

Today I finished \_\_\_\_\_ problems.

I solved \_\_\_\_\_ problems correctly.

Name \_\_\_\_\_

Date \_\_\_\_\_

## My Related Addition and Subtraction Practice

1. $5 + \underline{\quad} = 6$	11. $7 + \underline{\quad} = 10$	21. $4 + \underline{\quad} = 8$
2. $1 + \underline{\quad} = 6$	12. $10 - 7 = \underline{\quad}$	22. $8 - 4 = \underline{\quad}$
3. $6 - 1 = \underline{\quad}$	13. $5 + \underline{\quad} = 7$	23. $4 + \underline{\quad} = 7$
4. $9 + \underline{\quad} = 10$	14. $7 - 5 = \underline{\quad}$	24. $7 - 4 = \underline{\quad}$
5. $1 + \underline{\quad} = 10$	15. $5 + \underline{\quad} = 8$	25. $5 + \underline{\quad} = 9$
6. $10 - 9 = \underline{\quad}$	16. $8 - 5 = \underline{\quad}$	26. $9 - 5 = \underline{\quad}$
7. $5 + \underline{\quad} = 10$	17. $4 + \underline{\quad} = 6$	27. $6 + \underline{\quad} = 9$
8. $10 - 5 = \underline{\quad}$	18. $6 - 4 = \underline{\quad}$	28. $9 - 6 = \underline{\quad}$
9. $8 + \underline{\quad} = 10$	19. $3 + \underline{\quad} = 6$	29. $4 + \underline{\quad} = 7$
10. $10 - 8 = \underline{\quad}$	20. $6 - 3 = \underline{\quad}$	30. $7 - 4 = \underline{\quad}$

Today I finished \_\_\_\_\_ problems.

I solved \_\_\_\_\_ problems correctly.

Name \_\_\_\_\_

Date \_\_\_\_\_

## My Subtraction Practice

1. $6 - 0 = \underline{\quad}$	11. $6 - 3 = \underline{\quad}$	21. $8 - 4 = \underline{\quad}$
2. $6 - 1 = \underline{\quad}$	12. $7 - 3 = \underline{\quad}$	22. $8 - 3 = \underline{\quad}$
3. $7 - 1 = \underline{\quad}$	13. $9 - 3 = \underline{\quad}$	23. $8 - 5 = \underline{\quad}$
4. $8 - 1 = \underline{\quad}$	14. $10 - 8 = \underline{\quad}$	24. $9 - 5 = \underline{\quad}$
5. $6 - 2 = \underline{\quad}$	15. $10 - 6 = \underline{\quad}$	25. $9 - 4 = \underline{\quad}$
6. $7 - 2 = \underline{\quad}$	16. $10 - 4 = \underline{\quad}$	26. $7 - 3 = \underline{\quad}$
7. $9 - 2 = \underline{\quad}$	17. $10 - 5 = \underline{\quad}$	27. $10 - 7 = \underline{\quad}$
8. $10 - 10 = \underline{\quad}$	18. $7 - 6 = \underline{\quad}$	28. $9 - 7 = \underline{\quad}$
9. $10 - 9 = \underline{\quad}$	19. $7 - 5 = \underline{\quad}$	29. $9 - 6 = \underline{\quad}$
10. $10 - 7 = \underline{\quad}$	20. $6 - 4 = \underline{\quad}$	30. $8 - 6 = \underline{\quad}$

Today I finished \_\_\_\_\_ problems.

I solved \_\_\_\_\_ problems correctly.

A

Number correct:



Name \_\_\_\_\_

Date \_\_\_\_\_

\*Write the missing number.


1	$5 + \square = 10$		16	$9 + \square = 10$	
2	$9 + \square = 10$		17	$19 + \square = 20$	
3	$10 + \square = 10$		18	$5 + \square = 10$	
4	$0 + \square = 10$		19	$15 + \square = 20$	
5	$8 + \square = 10$		20	$1 + \square = 10$	
6	$7 + \square = 10$		21	$11 + \square = 20$	
7	$6 + \square = 10$		22	$3 + \square = 10$	
8	$4 + \square = 10$		23	$13 + \square = 20$	
9	$3 + \square = 10$		24	$4 + \square = 10$	
10	$\square + 7 = 10$		25	$14 + \square = 20$	
11	$2 + \square = 10$		26	$16 + \square = 20$	
12	$\square + 8 = 10$		27	$2 + \square = 10$	
13	$1 + \square = 10$		28	$12 + \square = 20$	
14	$\square + 2 = 10$		29	$18 + \square = 20$	
15	$\square + 3 = 10$		30	$11 + \square = 20$	



## Lee

Joy tiene 10 canicas en 1 mano y 10 canicas en la otra mano. ¿Cuántas canicas tiene en total?

## Dibuja



## Escribe

---


---

---

## Lee

Ted tenía 4 cajas con 10 lápices en caja. ¿Cuántos lápices tiene en total?

## Dibuja



## Escribe

---

---


---

## Lee

Lisa tiene 3 cajas de 10 crayones y 5 crayones adicionales. Sally tiene 19 y dice que tiene más crayones pero Lisa no está de acuerdo.

¿Quién está en lo correcto?


## Dibuja



## Lee

Lee tiene 4 lápices y compra 10 más. Kiana tiene 17 lápices y pierde 10 de ellos. ¿Quién tiene más lápices ahora? Usa dibujos, palabras y enunciados numéricos para explicar tu razonamiento.

## Dibuja






## Lee

Sheila tiene 3 bolsas con 10 pretzels en cada bolsa y 9 pretzels adicionales. Le da 1 bolsa a un amigo. ¿Cuántos pretzels tiene ahora?

**Extensión:** John tiene 19 pretzels. ¿Cuántos pretzels más necesita para tener la misma cantidad que tiene Sheila ahora?

## Dibuja




## Lee

Anton recogió 25 fresas. Recogió algunas fresas más. Luego, tenía 35 fresas.

- Usa una tabla de valor posicional para mostrar cuántas fresas más recogió Anton.
- Escribe una afirmación comparando las dos cantidades de fresas usando una de estas frases: *mayor que*, *menor que* o *igual a*.

## Dibuja




## Lee

Carl tiene una colección de piedras. Recolecta 10 piedras más. Ahora tiene 31 piedras. ¿Cuántas piedras tenía al principio?

- Usa tablas de valor posicional para mostrar cuántas piedras tenía Carl al principio.
- Escribe una afirmación comparando con cuántas piedras empezó y terminó Carl, usando una de las frases: *mayor que*, *menor que* o *igual a*.

## Dibuja




## Lee

Elaine y Mike estaban recogiendo arándanos. Elaine tenía 19 arándanos y se comió 10. Mike tenía 13 y recogió 7 más. Compara los arándanos de Elaine y Mike después de que Elaine se comió algunos y Mike recogió algunos más.

- Usa palabras e imágenes para mostrar cuántos arándanos tiene cada persona.
- Usa el término *mayor que* o *menor que* en tu afirmación.

## Dibuja




Usa el proceso LDE para resolver uno o más de los problemas.

### Lee

- Ben tenía 7 peces. Compró 4 peces en la tienda. ¿Cuántos peces tiene Ben?
- María tiene 7 peces en su pecera esta mañana. Compró algunos peces más y ahora tiene 9. ¿Cuántos compró ella?
- Anton tenía 8 peces. Algunos de ellos murieron y ahora Anton tiene 4 peces. ¿Cuántos peces murieron?

### Dibuja





Usa el proceso LDE para resolver uno o ambos problemas.

### Lee

- Algunos patos estaban en un estanque. 4 patitos se les unieron. Ahora, hay 6 patos en el estanque. ¿Cuántos patos había en el estanque primero?
- Había algunas ranas en el estanque. Tres saltaron fuera y ahora hay 5 ranas en el estanque. ¿Cuántas ranas había en el estanque primero?

### Dibuja

