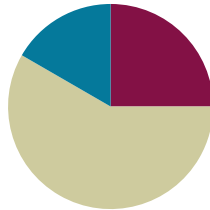


Lesson 15

Objective: Interpret the unknown in multiplication and division to model and solve problems.

Suggested Lesson Structure

■ Fluency Practice	(15 minutes)
■ Concept Development	(35 minutes)
■ Student Debrief	(10 minutes)
Total Time	(60 minutes)



Fluency Practice (15 minutes)

- Multiply By 9 **3.OA.7** (7 minutes)
- Group Counting **3.OA.1** (4 minutes)
- Divide by 9 **3.OA.7** (4 minutes)

Multiply By 9 (7 minutes)

Materials: (S) Multiply By 9 (6–10) (Pattern Sheet)

Note: This activity builds fluency with respect to multiplication facts using units of 9. It supports students knowing from memory all products of two one-digit numbers. See Lesson 5 for the directions regarding administering a Multiply By Pattern Sheet.

T: (Write $6 \times 9 = \underline{\quad}$.) Let's skip-count up by nine to solve. (Count with fingers to 6 as students count.)

S: 9, 18, 27, 36, 45, 54.

T: Let's skip-count down to find the answer, too. Start at 90. (Starting with 10 fingers, count down as students count.)

S: 90, 81, 72, 63, 54.

T: Let's skip-count up again to find the answer, but this time start at 45. (Starting with 5 fingers, count up as students count.)

S: 45, 54.

Continue with the following possible suggestions: 8×9 , 7×9 , and 9×9 .

T: (Distribute the Multiply By 9 Pattern Sheet.) Let's practice multiplying by 9. Be sure to work left to right across the page.

Group Counting (4 minutes)

Note: Group counting reviews interpreting multiplication as repeated addition. Counting by sixes, sevens, and eights reviews multiplication taught previously in the module. Direct students to count forward and backward, occasionally changing the direction of the count:

- Sixes to 60
- Sevens to 70
- Eights to 80

Divide by 9 (4 minutes)

Materials: (S) Personal white board

Note: This fluency activity reviews using a letter to represent the unknown, which was first taught in Lesson 3.

T: (Write $a \times 9 = 18$.) On your personal white board, write the value of a .

S: (Write $a = 2$.)

T: (Write $18 \div 9 = \underline{\quad}$.) Say the division sentence.

S: $18 \div 9 = 2$.

Continue with the following possible sequence: $b \times 9 = 45$, $c \times 9 = 36$, $d \times 9 = 54$, $e \times 9 = 27$, $f \times 9 = 90$, $g \times 9 = 81$, and $h \times 9 = 72$.

Concept Development (35 minutes)

Materials: (S) Personal white board

Problem 1: Interpret the unknown in multiplication.

Write or project the following problem: Ada buys 9 packs of highlighters with 4 in each pack. After giving 1 highlighter to each classmate, she has 17 left. How many highlighters does Ada give away?

T: Model the problem. Then, tell your partner the steps you'll follow to solve it.

S: (Model.) First, you have to find out how many highlighters Ada has. → After that, subtract 17 from the total to see how many she gives away.

T: Write and solve an equation to find the total number of highlighters. Use h to represent the unknown. (Allow students time to finish their work.)

T: What equation did you use?

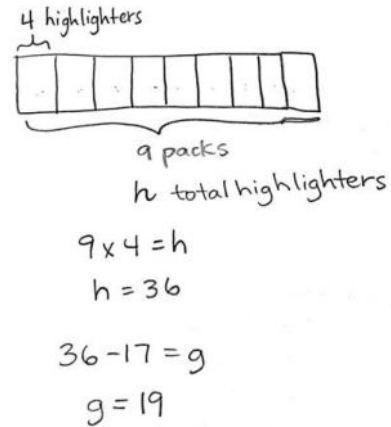
S: $9 \times 4 = h$.



NOTES ON MULTIPLE MEANS OF ENGAGEMENT:

Students working above grade level and others may not identify a strategy for solving $9 \times 4 = 36$, instead saying, "It's easy! I just knew it." Challenge students to articulate strategies that work so well they seem automatic. Ask, "Did you count by fours? Did you switch the factors and calculate 4×9 instead? Did you use a pattern to solve? If so, what pattern?"

- T: Talk to your partner. What strategy for solving nines facts did you use?
 S: (Discuss.)
 T: What is the value of h ?
 S: The value of h is 36.
 T: How many highlighters does Ada have at the start?
 S: 36 highlighters.
 T: Is the problem complete yet?
 S: No, we have to find how many highlighters Ada gives away.
 T: Solve the second step of the problem using the letter g to represent the unknown.
 S: (Write $36 - 17 = g$ and solve.)
 T: What is the value of g ?
 S: The value of g is 19.
 T: How many highlighters does Ada give away?
 S: Ada gives away 19 highlighters.
 T: Can we tell how many classmates Ada has? How do you know?
 S: Ada has 19 classmates! I know because she gave 1 highlighter to each classmate, and she gave away 19 highlighters.



Problem 2: Interpret the unknown in division.

Write the following problem: Eliza finds a bag of 72 marbles and runs to share them with 8 of her friends. She’s so excited that she drops the bag and loses 18 marbles. How many marbles will Eliza and each of her friends get?

- T: What should we do first, subtract or divide? Why?
 S: We should subtract. → Subtract because we need to find out how many marbles Eliza has left after she loses some.
 T: Write an equation to solve for the first unknown. Use m to represent the number of marbles Eliza has.
 S: (Solve $72 - 18 = m$.)
 T: What is the value of m ?
 S: 54.
 T: So, how many marbles does Eliza have to give away?
 S: 54 marbles!
 T: Is our work on this problem finished?
 S: No! Now we have to find out how many marbles each friend gets!
 T: Draw a model that represents how many marbles each friend gets.

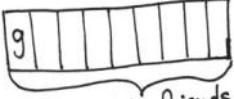


**NOTES ON
 MULTIPLE MEANS
 OF ACTION AND
 EXPRESSION:**

Some students may mistakenly interpret the divisor to be 8 rather than 9. Use this example to highlight the advantages of carefully reading word problems and drawing a picture to solve. Guide students to underline *Eliza and each of her friends* in the final question before attempting an equation.

- T: (After finishing.) How many units are in your model?
 S: 9 units.
 T: What part of the problem tells you that your model needs 9 units?
 S: Where it says, "Eliza and each of her friends." She has 8 friends, and $8 + 1 = 9$.
 T: Write an equation to solve for the second unknown. Use g to represent the number of marbles each friend gets.
 S: (Solve $54 \div 9 = g$.)
 T: How many marbles does each friend get? How do you know?
 S: Each friend gets 6 marbles. \rightarrow 6 marbles because the value of g is 6, and g represents the number of marbles each friend gets.

$72 - 18 = m$
 $m = 54$



Eliza and friends
 54 marbles
 $54 \div 9 = g$
 $g = 6$
 Each friend gets 6 marbles.

Problem Set (10 minutes)

Students should do their personal best to complete the Problem Set within the allotted 10 minutes. For some classes, it may be appropriate to modify the assignment by specifying which problems they work on first. Some problems do not specify a method for solving. Students should solve these problems using the RDW approach used for Application Problems.

Student Debrief (10 minutes)

Lesson Objective: Interpret the unknown in multiplication and division to model and solve problems.

The Student Debrief is intended to invite reflection and active processing of the total lesson experience.

Invite students to review their solutions for the Problem Set. They should check work by comparing answers with a partner before going over answers as a class. Look for misconceptions or misunderstandings that can be addressed in the Debrief. Guide students in a conversation to debrief the Problem Set and process the lesson.

Any combination of the questions below may be used to lead the discussion.

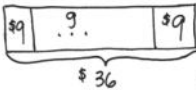
- In your model for Problem 1, is the unknown the number of units or the size of each unit?
- In Problem 3, how did you show what letter you used to represent the unknown and what it stood for?
- How did you solve the large division fact in Problem 4?
- What longer equation, including parentheses, can be used to solve Problem 6?

NYS COMMON CORE MATHEMATICS CURRICULUM Lesson 15 Problem Set 3•3

Name Gina Date _____

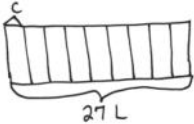
Write an equation, and use a letter to represent the unknown for Problems 1–6.

1. Mrs. Parson gave each of her grandchildren \$9. She gave a total of \$36. How many grandchildren does Mrs. Parson have?



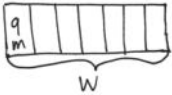
$36 \div 9 = g$
 $g = 4$
 Mrs. Parson has 4 grandchildren.

2. Shiva pours 27 liters of water equally into 9 containers. How many liters of water are in each container?



$27 \div 9 = c$
 $c = 3$
 There are 3 liters in each container.

3. Derek cuts 7 pieces of wire. Each piece is 9 meters long. What is the total length of the 7 pieces?



$7 \times 9 = W$
 $W = 63$
 The total length of 7 pieces of wire is 63 meters.

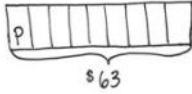
EUREKA MATH Lesson 15: Interpret the unknown in multiplication and division to model and solve problems. 5/6/15 engage^{ny}

Exit Ticket (3 minutes)

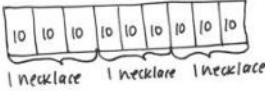
After the Student Debrief, instruct students to complete the Exit Ticket. A review of their work will help with assessing students' understanding of the concepts that were presented in today's lesson and planning more effectively for future lessons. The questions may be read aloud to the students.

NYS COMMON CORE MATHEMATICS CURRICULUM Lesson 15 Problem Set 3•3

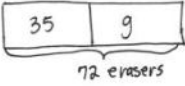
4. Aunt Deena and Uncle Chris share the cost of a limousine ride with their 7 friends. The ride cost a total of \$63. If everyone shares the cost equally, how much does each person pay?
 Aunt Deena + Uncle Chris + 7 friends is 9
 $63 \div 9 = p$
 $p = 7$
 Each person pays \$7.



5. Cara bought 9 packs of beads. There are 10 beads in each pack. She always uses 30 beads to make each necklace. How many necklaces can she make if she uses all the beads?
 $9 \times 10 = 90$
 She buys 90 beads.
 Cara can make 3 necklaces.



6. There are 8 erasers in a set. Damon buys 9 sets. After giving some erasers away, Damon has 35 erasers left. How many erasers did he give away?
 $9 \times 8 = 72$
 Damon buys 72 erasers.
 $72 - 35 = 9$
 $9 = 37$
 Damon gave away 37 erasers.



EUREKA MATH Lesson 15: Interpret the unknown in multiplication and division to model and solve problems. Date: 5/6/15 engage^{ny} 47

Multiply.

$9 \times 1 = \underline{\quad\quad}$ $9 \times 2 = \underline{\quad\quad}$ $9 \times 3 = \underline{\quad\quad}$ $9 \times 4 = \underline{\quad\quad}$

$9 \times 5 = \underline{\quad\quad}$ $9 \times 6 = \underline{\quad\quad}$ $9 \times 7 = \underline{\quad\quad}$ $9 \times 8 = \underline{\quad\quad}$

$9 \times 9 = \underline{\quad\quad}$ $9 \times 10 = \underline{\quad\quad}$ $9 \times 5 = \underline{\quad\quad}$ $9 \times 6 = \underline{\quad\quad}$

$9 \times 5 = \underline{\quad\quad}$ $9 \times 7 = \underline{\quad\quad}$ $9 \times 5 = \underline{\quad\quad}$ $9 \times 8 = \underline{\quad\quad}$

$9 \times 5 = \underline{\quad\quad}$ $9 \times 9 = \underline{\quad\quad}$ $9 \times 5 = \underline{\quad\quad}$ $9 \times 10 = \underline{\quad\quad}$

$9 \times 6 = \underline{\quad\quad}$ $9 \times 5 = \underline{\quad\quad}$ $9 \times 6 = \underline{\quad\quad}$ $9 \times 7 = \underline{\quad\quad}$

$9 \times 6 = \underline{\quad\quad}$ $9 \times 8 = \underline{\quad\quad}$ $9 \times 6 = \underline{\quad\quad}$ $9 \times 9 = \underline{\quad\quad}$

$9 \times 6 = \underline{\quad\quad}$ $9 \times 7 = \underline{\quad\quad}$ $9 \times 6 = \underline{\quad\quad}$ $9 \times 7 = \underline{\quad\quad}$

$9 \times 8 = \underline{\quad\quad}$ $9 \times 7 = \underline{\quad\quad}$ $9 \times 9 = \underline{\quad\quad}$ $9 \times 7 = \underline{\quad\quad}$

$9 \times 8 = \underline{\quad\quad}$ $9 \times 6 = \underline{\quad\quad}$ $9 \times 8 = \underline{\quad\quad}$ $9 \times 7 = \underline{\quad\quad}$

$9 \times 8 = \underline{\quad\quad}$ $9 \times 9 = \underline{\quad\quad}$ $9 \times 9 = \underline{\quad\quad}$ $9 \times 6 = \underline{\quad\quad}$

$9 \times 9 = \underline{\quad\quad}$ $9 \times 7 = \underline{\quad\quad}$ $9 \times 9 = \underline{\quad\quad}$ $9 \times 8 = \underline{\quad\quad}$

$9 \times 9 = \underline{\quad\quad}$ $9 \times 8 = \underline{\quad\quad}$ $9 \times 6 = \underline{\quad\quad}$ $9 \times 9 = \underline{\quad\quad}$

$9 \times 7 = \underline{\quad\quad}$ $9 \times 9 = \underline{\quad\quad}$ $9 \times 6 = \underline{\quad\quad}$ $9 \times 8 = \underline{\quad\quad}$

$9 \times 9 = \underline{\quad\quad}$ $9 \times 7 = \underline{\quad\quad}$ $9 \times 6 = \underline{\quad\quad}$ $9 \times 8 = \underline{\quad\quad}$

multiply by 9 (6–10)

4. Aunt Deena and Uncle Chris share the cost of a limousine ride with their 7 friends. The ride cost a total of \$63. If everyone shares the cost equally, how much does each person pay?
5. Cara bought 9 packs of beads. There are 10 beads in each pack. She always uses 30 beads to make each necklace. How many necklaces can she make if she uses all the beads?
6. There are 8 erasers in a set. Damon buys 9 sets. After giving some erasers away, Damon has 35 erasers left. How many erasers did he give away?

Name _____

Date _____

- The store clerk equally divides 36 apples among 9 baskets. Draw a tape diagram, and label the number of apples in each basket as a . Write an equation, and solve for a .

- Elijah gives each of his friends a pack of 9 almonds. He gives away a total of 45 almonds. How many packs of almonds did he give away? Model using a letter to represent the unknown, and then solve.

- Denice buys 7 movies. Each movie costs \$9. What is the total cost of 7 movies? Use a letter to represent the unknown. Solve.

4. Mr. Doyle shares 1 roll of bulletin board paper equally with 8 teachers. The total length of the roll is 72 meters. How much bulletin board paper does each teacher get?
5. There are 9 pens in a pack. Ms. Ochoa buys 9 packs. After giving her students some pens, she has 27 pens left. How many pens did she give away?
6. Allen buys 9 packs of trading cards. There are 10 cards in each pack. He can trade 30 cards for a comic book. How many comic books can he get if he trades all of his cards?