

Name: \_\_\_\_\_

DATE: AM # 1

Add:


1.  $3 + 4 = \underline{\quad}$

2.  $6 + 11 = \underline{\quad}$

Subtract:

3.  $12 - 7 = \underline{\quad}$

4.  $17 - 9 = \underline{\quad}$



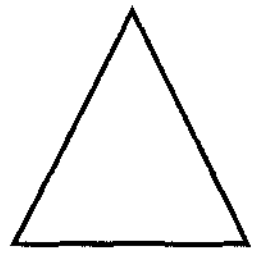
5. Fill in the missing number.

$3 + \underline{\quad} = 10$

6. Compare the two numbers by writing  $>$ ,  $<$ , or  $=$  in the circle.

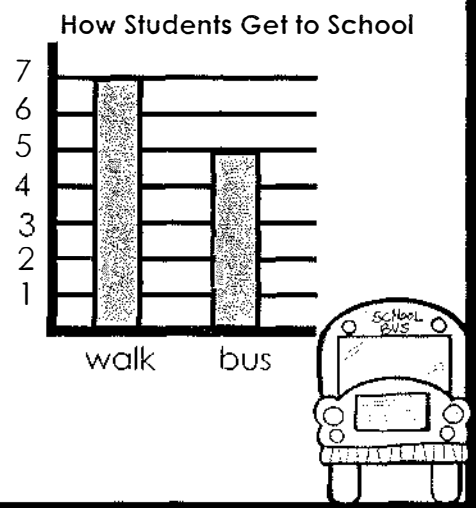
**12** ○ **14**

7. Name this shape.

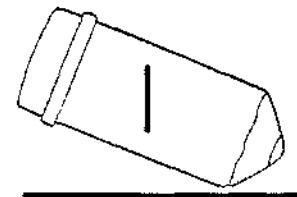



8. The classroom is 60 steps away from the gym. It is 50 steps away from the library. How many more steps does it take to get to the gym than the library?

9. How many kids ride the bus to school?



10. What time is it?



#	answer
1	
2	
3	
4	
5	
6	
7	
8	
9	
10	

Name: \_\_\_\_\_

Date: AM1 # 2

Add:


1.  $4 + 7 =$  \_\_\_\_\_

2.  $3 + 6 =$  \_\_\_\_\_

Subtract:

3.  $15 - 6 =$  \_\_\_\_\_

4.  $17 - 4 =$  \_\_\_\_\_




5. Which is another way to write  $2 + 3 = 5$

$5 + 2 = 3$   
or  
 $3 + 2 = 5$

6. Are the numbers in order?

13 14 15 16

7. How many circles?



8. There were 18 erasers in the box. We used 12 erasers.

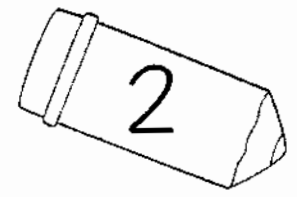
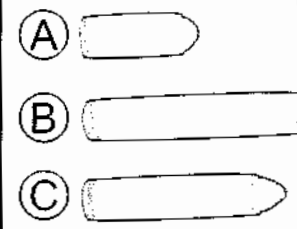
How many erasers are left in the box?

9. How many kids like paint the best?

Favorite Art Supply

crayon	marker	paint

10. Which crayon is the shortest?



#	answer
1	
2	
3	
4	
5	
6	
7	
8	
9	
10	

Name: \_\_\_\_\_

Date: AM 1 # 3

Add:


1.  $8 + 3 =$  \_\_\_\_\_

2.  $2 + 17 =$  \_\_\_\_\_

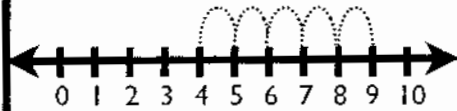
Subtract:

3.  $20 - 11 =$  \_\_\_\_\_

4.  $19 - 8 =$  \_\_\_\_\_



5. Use the number line to find the sum.



$4 + 5 =$

6. Write the missing number.


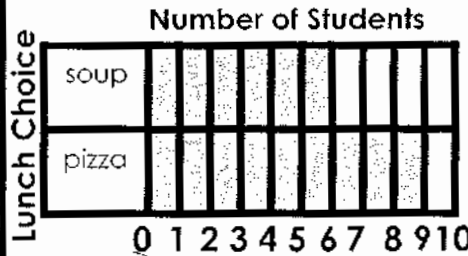
22	23		25	26
----	----	--	----	----

7. How many sides does the shape have?






8. There are ten buses that leave the school each day. Four go right and the rest go left. How many buses turn left?

9. How many students ate pizza?



10. How many squares long is the school bus?



#	answer
1	
2	
3	
4	
5	
6	
7	
8	
9	
10	

Name: \_\_\_\_\_

Date: AM1 # 4

Add:

1.  $4 + 6 = \underline{\hspace{2cm}}$

2.  $7 + 12 = \underline{\hspace{2cm}}$

Subtract:

3.  $12 - 6 = \underline{\hspace{2cm}}$


4.  $13 - 5 = \underline{\hspace{2cm}}$



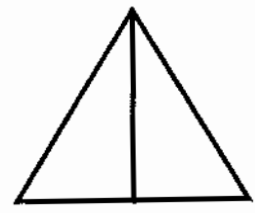
5. Is the equation true or false?

$2 + 3 = 0 + 5$

6. What number is 10 more?



7. Is the shape cut into halves or thirds?



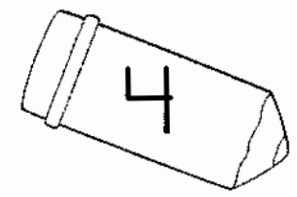

8. There are 3 kids on the swings, 4 at the slide, and 6 playing tag. How many kids are there in all?

9. How many girls are in the class?

**Students in Our Class**

girls	### ###
boys	### ###


10. What time is it?



#	answer
1	
2	
3	
4	
5	
6	
7	
8	
9	
10	

Name: \_\_\_\_\_

Date: AMI # 5



Add:


1.  $5 + 9 =$  \_\_\_\_\_

2.  $6 + 8 =$  \_\_\_\_\_


Subtract:

3.  $13 - 6 =$  \_\_\_\_\_

4.  $18 - 4 =$  \_\_\_\_\_



5. How many counters does he have on his ten frame?

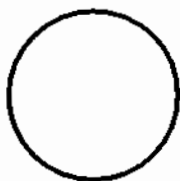


9. How many students like reading the best?

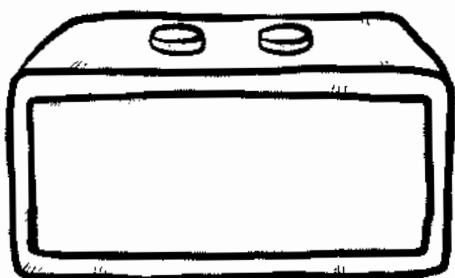
Favorite Subject	
social studies	
reading	
writing	

6. A number has a 7 in the tens place and a 2 in the ones place. What is the number?

7. Draw a line to make 2 equal parts.



10. The bus comes at seven-thirty each morning. Show how to write that time.



8. The class did math for 30 minutes before lunch. Then they did math for another 10 minutes after lunch. How many minutes did they do math in all?

#	answer
1	
2	
3	
4	
5	
6	
7	
8	
9	
10	

Name: \_\_\_\_\_

Date: AMI # 6

Add:

1.  $9 + 4 = \underline{\quad}$

2.  $3 + 14 = \underline{\quad}$

Subtract:

3.  $16 - 14 = \underline{\quad}$

4.  $19 - 15 = \underline{\quad}$



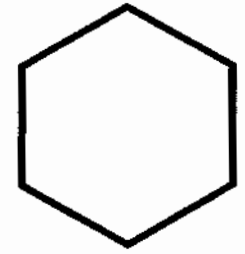
5. Fill in the missing number.

$8 + \underline{\quad} = 10$

6. Compare the two numbers by writing  $>$ ,  $<$ , or  $=$  in the circle.

**15** ○ **13**

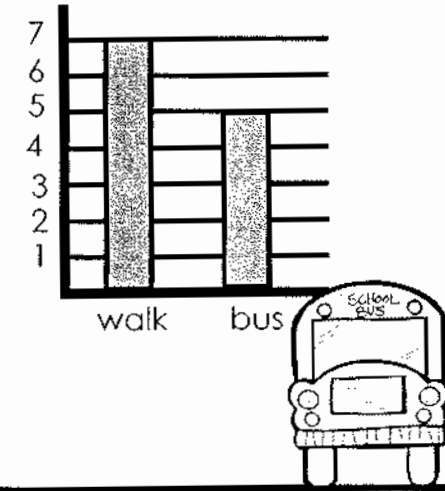
7. Name this shape.





8. Ben used 8 apples to make a pie. Sue used seven apples to make a pie. How many apples did they use in all?

9. How many kids walk to school?

How Students Get to School




10. What time is it?



#	answer
1	
2	
3	
4	
5	
6	
7	
8	
9	
10	

Name: \_\_\_\_\_

Date: AMI # 7



Add:


1.  $12 + 7 =$  \_\_\_\_\_

2.  $11 + 9 =$  \_\_\_\_\_


Subtract:

3.  $9 - 6 =$  \_\_\_\_\_

4.  $18 - 6 =$  \_\_\_\_\_



5. Which equation matches the pictures?




$3 + 4 = 7$  or  $2 + 3 = 5$

6. Are the numbers in order?

28 29 31 30

7. How many triangles?




8. There were 8 kids on the bus. Seven more kids got picked up. How many kids are on the bus now?

9. How many kids like crayons the best?

Favorite Art Supply

crayon	marker	paint

10. Which glue stick is the tallest?



#	answer
1	
2	
3	
4	
5	
6	
7	
8	
9	
10	

Name: \_\_\_\_\_

Date: AML # 8

Add:


1.  $5 + 8 =$  \_\_\_\_\_

2.  $8 + 11 =$  \_\_\_\_\_

Subtract:

3.  $14 - 5 =$  \_\_\_\_\_

4.  $19 - 7 =$  \_\_\_\_\_



5. Use the number line to find the sum.

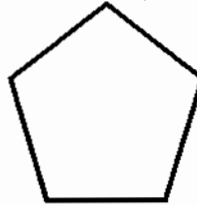


$5 + 3 =$

6. Write the missing number.


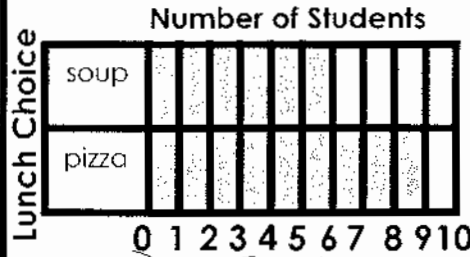
19	<input type="text"/>	21	22	23
----	----------------------	----	----	----

7. How many sides does the shape have?



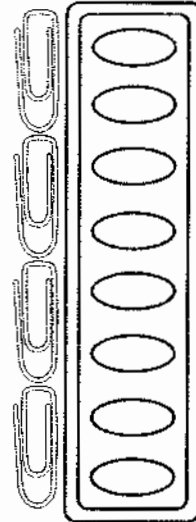


8. It took Lily 13 steps to walk across Mrs. Smith's room. It took her 19 steps to walk across Mrs. Jay's room. How many steps longer is Mrs. Jay's room?

9. How many students ate soup?



10. How many paper clips long is the paint?

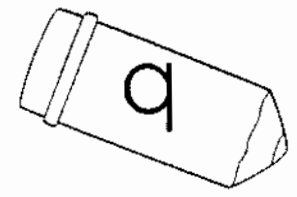


#	answer
1	
2	
3	
4	
5	
6	
7	
8	
9	
10	



Name: \_\_\_\_\_

Date: AM # 9



Add:


1.  $7 + 11 = \underline{\hspace{2cm}}$

2.  $9 + 7 = \underline{\hspace{2cm}}$

Subtract:

3.  $17 - 8 = \underline{\hspace{2cm}}$

4.  $11 - 3 = \underline{\hspace{2cm}}$



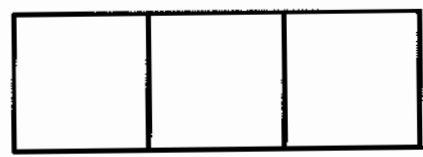
5. Is the equation true or false?

$4 + 3 = 2 + 6$

6. What number is 10 more?



7. Is the shape cut into thirds or fourths?




8. The class has 19 students. The room has 16 desks. How many more desks do they need?

9. How many boys are in the class?

Students in the Class	
girls	
boys	

10. What time is it?



#	answer
1	
2	
3	
4	
5	
6	
7	
8	
9	
10	

Name: \_\_\_\_\_

Date: AM1 # 10

Add:


1.  $11 + 7 =$  \_\_\_\_\_

2.  $4 + 15 =$  \_\_\_\_\_

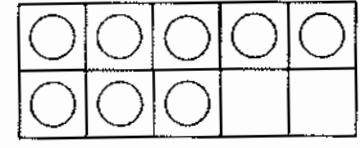
Subtract:

3.  $16 - 13 =$  \_\_\_\_\_

4.  $20 - 13 =$  \_\_\_\_\_




5. How many more counters are needed to make 10?



6. A number has a 6 in the tens place and a 3 in the ones place. What is the number?

7. Draw a line to make 2 equal parts?



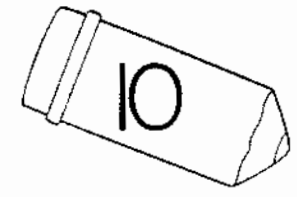
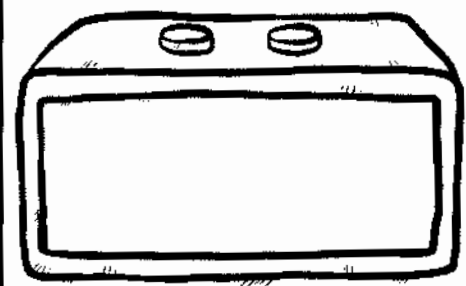
8. There are 20 markers and 8 crayons in Nick's desk. How many more markers than crayons does Nick have?

9. How many students like writing the best?

Favorite Subject

social studies	
reading	
writing	

10. Art class starts at nine-thirty each Friday. Show how to write that time.



#	answer
1	
2	
3	
4	
5	
6	
7	
8	
9	
10	