

Ready, Set, Go!

©2013 www.flickr.com/photos/gabbyNIAID1

Ready

Topic: Comparing additive and multiplicative patterns.

The sequences below exemplify either an additive (arithmetic) or a multiplicative (geometric) pattern. Identify the type of sequence, fill in the missing values on the table and write an equation.

1.

Term 0	1st	2nd	3rd	4th	5th	6th	7th	8th
Value	2	4	8	16	32	a. 64	b. 128	c. 256

d. Type of Sequence: *Geometric* e. Equation: $f(x) = 1.2^x$

2.

Term 0	1st	2nd	3rd	4th	5th	6th	7th	8th
Value	16	10	4	-2	-8	-14	-20	-26

e. Type of Sequence: ~~Arithmetic~~ f. Equation: ~~$f(x) = -6x + 16$~~

3.

Term 0	1st	2nd	3rd	4th	5th	6th	7th	8th
Value	-3	9	-27	81	a. -243	b. 729	c. -2187	d. 6561

e. Type of Sequence: *Geometric* f. Equation: $f(x) = 1 \cdot (-3)^x$

4.

Term 0	1st	2nd	3rd	4th	5th	6th	7th	8th
Value	1	1	1	1	1	1	1	1

e. Type of Sequence: ~~Arithmetic~~ f. Equation: ~~$f(x) = 1$~~

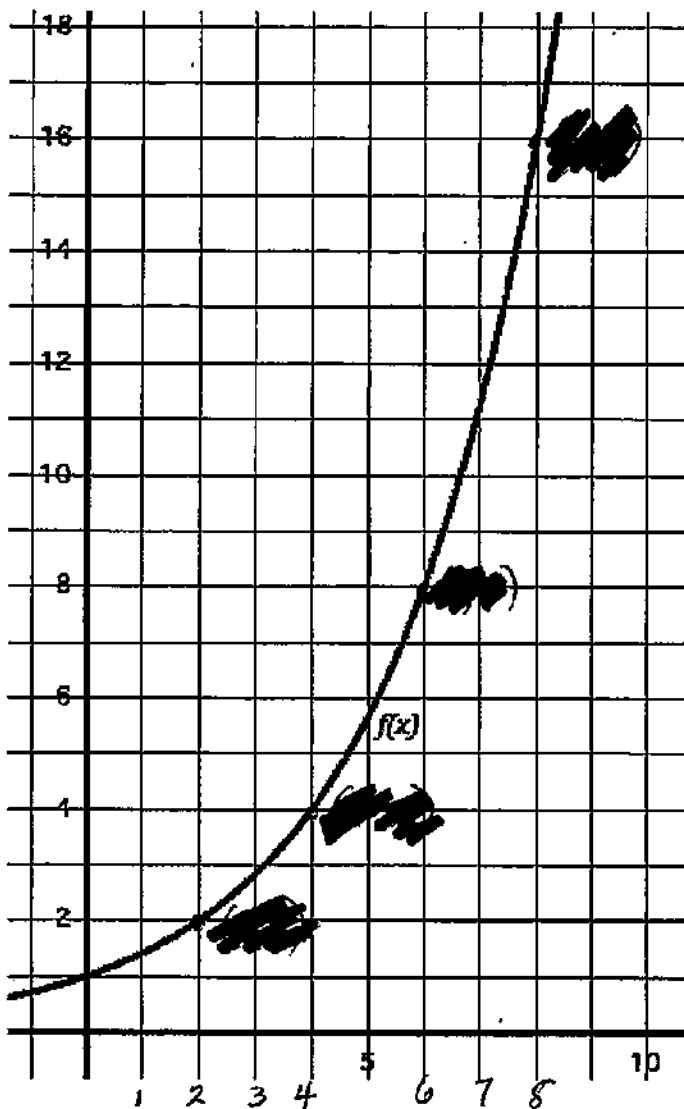
5.

Term 0	1st	2nd	3rd	4th	5th	6th	7th	8th
Value	-9	-2	5	12	a. 19	b. 26	c. 33	d. 40

e. Type of Sequence: *Arithmetic* f. Equation: $f(x) = 7x - 16$

Solving Quadratic and Other Equations | 3.1

Use the graph of the function to find the desired values of the function. Also create an explicit equation for the function.



6. Find the value of $f(2)$

7. Find where $f(x) = 4$

$$x = 4$$

8. Find the value of $f(6)$

9. Find where $f(x) = 16$

$$x = 8$$

10. What do you notice about the way that inputs and outputs for this function relate? (Create an in-out table if you need to.)

11. What is the explicit equation for this function?

$$f(x) = (\sqrt{2})^x$$

$$= 2^{\frac{1}{2}x}$$

Solving Quadratic and Other Equations | 3.1

Set

Topic: Evaluate the expressions with rational exponents.

Fill in the missing values of the table based on the growth that is described.

12. The growth in the table is triple at each whole year.

Handwritten: triple at each whole year

Years	0	1	2	3	4
bacteria	2	6	18	54	162

13. The growth in the table is triple at each whole year.

Handwritten: triple at each whole year

Years	0	1/3	2/3	1	4/3	5/3	2	7/3	8/3
bacteria	2	2 ^{2/3}	2 ^{4/3}	6	6 ^{2/3}	6 ^{4/3}	18	18 ^{2/3}	18 ^{4/3}

*Handwritten: 2 * 3 = 6, r = 3, x3*

14. The values in the table grow by a factor of four at each whole year.

Years	0	1	2	3
bacteria	2	8	32	128

Go

Topic: Simplifying exponents

Simplify the following expressions using exponent rules and relationships, write your answers in exponential form. (For example: $2^2 \cdot 2^5 = 2^7$)

15. $3^2 \cdot 3^5 = 3^{2+5} = 3^7$

16. $\frac{5^3}{5^2} = 5$

17. $2^{-5} = \frac{1}{2^5}$

18. ~~Handwritten scribble~~

19. $\frac{7^5}{7^2} \cdot \frac{7^3}{7^4} = 7^{5-2+3-4} = 7^2$

20. $\frac{3^{-2} \cdot 3^5}{3^7} = \frac{3^{-2+5}}{3^7} = \frac{3^3}{3^7} = \frac{1}{3^{7-3}} = \frac{1}{3^4}$

Name:

Solving Quadratic and Other Equations | 3.2

Ready, Set, Go!



©2013 www.flickr.com/photos/tax credits

Ready

Topic: Simplifying Radicals

A very common radical expression is a square root. One way to think of a square root is the number that will multiply by itself to create a desired value. For example: $\sqrt{2}$ is the number that will multiply by itself to equal 2. And in like manner $\sqrt{16}$ is the number that will multiply by itself to equal 16, in this case the value is 4 because $4 \times 4 = 16$. (When the square root of a square number is taken you get a nice whole number value. Otherwise an irrational number is produced.)

This same pattern holds true for other radicals such as cube roots and fourth roots and so forth. For example: $\sqrt[3]{8}$ is the number that will multiply by itself three times to equal 8. In this case it is equal to the value of 2 because $2^3 = 2 \times 2 \times 2 = 8$.

With this in mind radicals can be simplified. See the examples below.

<p>Example 1: Simplify $\sqrt{20}$</p> $\sqrt{20} = \sqrt{4 \cdot 5} = \sqrt{2 \cdot 2 \cdot 5} = 2\sqrt{5}$	<p>Example 2: Simplify $\sqrt[3]{96}$</p> $\sqrt[3]{96} = \sqrt[3]{2^5 \cdot 3} = 2\sqrt[3]{3}$
-------------------------------------------------------------------------------------------------------------------------	------------------------------------------------------------------------------------------------------------

Simplify each of the radicals.

$$1. \sqrt{40} = \sqrt{4 \cdot 10}$$

$$= \sqrt{4 \cdot 10}$$

$$= 2\sqrt{10}$$

$$2. \sqrt{50} =$$

$$3. \sqrt[3]{16}$$

$$= \sqrt[3]{8 \cdot 2} = 2\sqrt[3]{2}$$

$$4. \sqrt{72} =$$

$$5. \sqrt[4]{81} = \sqrt[4]{3^4}$$

$$= 3$$

$$6. \sqrt{32} =$$

$$7. \sqrt[5]{160}$$

$$= \sqrt[5]{2^5 \cdot 5}$$

$$= 2\sqrt[5]{5}$$

$$8. \sqrt{45} =$$

$$9. \sqrt[3]{54}$$

$$= \sqrt[3]{27 \cdot 2}$$

$$= \sqrt[3]{3^3 \cdot 2}$$

$$= 3\sqrt[3]{2}$$

© 2013 MATHEMATICS VISION PROJECT | MVP

In partnership with the Utah State Office of Education

Licensed under the Creative Commons Attribution-NonCommercial-ShareAlike 3.0 Unported license



Solving Quadratic and Other Equations | 3.2

Set

Topic: Finding arithmetic and geometric means and making meaning of rational exponents.

You may have found arithmetic and geometric means in your prior work. Finding arithmetic and geometric means requires finding values of a sequence between given values from non-consecutive terms. In each of the sequences below determine the means and show how you found them.

Find the arithmetic means for the following. Show your work.

10.

_____	3
_____	11

11.

x	1	2	3	5
y	18	11	4	-10

$18 + 4d = -10$ $4d = -28$ $d = -7$

12.

x	1	2	3	4	5	6	7
y	_____	_____	_____	_____	_____	_____	_____

Find the geometric means for the following. Show your work.

13.

x	1	2	3
y	3	6	12

$3 \cdot r = 6$ $6 \cdot r = 12$ $r = 2$

14.

x	1	2	3	4
y	_____	_____	_____	875

15.

x	1	2	3	4	5	6
y	4	12	36	108	324	972

$4 \cdot r = 12$ $12 \cdot r = 36$ $36 \cdot r = 108$ $108 \cdot r = 324$ $324 \cdot r = 972$

Fill in the tables of values and find the factor used to move between whole number values, F_w , as well as the factor, F_c , used to move between each column of the table.

16.

x	0	1	2	3	4	5	6
y	4	_____	_____	_____	_____	_____	_____

d. $F_w =$ _____
e. $F_c =$ _____




Solving Quadratic and Other Equations | 3.2

17.

x	0	$\frac{1}{2}$	1	$\frac{3}{2}$	2
y	4	a. $4\sqrt{2}$	8	b. $8\sqrt{2}$	c. 16

d. $F_w = 2$
e. $F_c = \sqrt{2}$



18.

x				
y				

d. $F_w =$
e. $F_c =$



Go

Topic: Evaluating functions

Find the desired values for each function below.

19. $f(x) = 2x - 7$



20. $g(x) = 3^x(2)$

a. Find $g(-4)$
 $g(-4) = 3^{-4}(2) = \frac{2}{3^4} = \frac{2}{81}$
b. Find $g(x) = 162$
 $162 = 3^x(2)$ $81 = 3^x$ $x = 4$
c. Find $g(\frac{1}{2})$
 $g(\frac{1}{2}) = 3^{\frac{1}{2}} \cdot 2 = 2\sqrt{3}$

21. $I(t) = 210(1.08)^t$

a. Find $I(12)$
 $I = (210)(1.08)^{12} = 528.82$
b. Find $I(t) = 420$
 $420 = 210(1.08)^t$ $2 = (1.08)^t$ $t \approx 9$
c. Find $I(\frac{1}{2})$
 $I(\frac{1}{2}) = 210(1.08)^{\frac{1}{2}} = 218.24$

22. $h(x) = x^2 + x - 6$



23. $k(x) = -5x + 9$

a. Find $k(-7)$
 $k(-7) = -5(-7) + 9 = 44$
b. Find $k(x) = 0$
 $0 = -5x + 9$ $x = \frac{9}{5}$
c. Find $k(\frac{1}{2})$
 $k(\frac{1}{2}) = -5(\frac{1}{2}) + 9 = -\frac{5}{2} + 9 = \frac{-5+18}{2} = \frac{13}{2}$

24. $m(x) = (5^x)2$



© 2013 MATHEMATICS VISION PROJECT | MVP

In partnership with the Utah State Office of Education

Licensed under the Creative Commons Attribution-NonCommercial-ShareAlike 3.0 Unported license

Name:

Solving Quadratic and Other Equations | 3.3

Ready, Set, Go!



©2013 www.flickr.com/photos/zooboing

Ready

Topic: Meaning of Exponents

In the table below there is a column for the exponential form, the meaning of that form, which is a list of factors and the standard form of the number. Fill in the form that is missing.

Exponential form	List of factors	Standard Form
5^3	$5 \cdot 5 \cdot 5$	125
1a. 7^7	$7 \cdot 7 \cdot 7 \cdot 7 \cdot 7 \cdot 7 \cdot 7$	b. 823, 543
2. 2^{10}	a. 	b.
3a. 3^4	b. $3 \cdot 3 \cdot 3 \cdot 3$	81
4. 11^5	a. 	b.
5a. 3^{10}	$3 \cdot 3 \cdot 3 \cdot 3 \cdot 3 \cdot 3 \cdot 3 \cdot 3 \cdot 3 \cdot 3$	b. 59, 049
6a. 	b. 	625

* ANSWERS VARY #7-11

Provide at least three other equivalent forms of the exponential expression. Use rules of exponents such as $3^5 \cdot 3^6 = 3^{11}$ and $(5^2)^3 = 5^6$ as well as division properties and others.

	1 st Equivalent Form	2 nd Equivalent Form	3 rd Equivalent Form
7. $2^{10} =$	$(2^5)^2$	$(2^2)^5$	$2^4 \cdot 2^4$
8. $3^7 =$	 	 	
9. $13^{-8} =$	$13^{-10} \cdot 13^2$	$\frac{13^2}{13^{10}}$	$(3^{-2})^4$
10. $7^{\frac{1}{3}} =$	 	 	
11. $5^1 =$	$5^{\frac{1}{2}} \cdot 5^{\frac{1}{2}}$	$\frac{5^3}{5^2}$	$(5^2)^{\frac{1}{2}}$

© 2013 MATHEMATICS VISION PROJECT | MVP

In partnership with the Utah State Office of Education

Licensed under the Creative Commons Attribution-NonCommercial-ShareAlike 3.0 Unported license



Solving Quadratic and Other Equations | 3.3

Set

Topic: Finding equivalent expressions and functions.

Determine whether all three expressions in each problem below are equivalent. Justify why or why they are not equivalent.

12.

~~_____~~ ~~_____~~ ~~_____~~

13.

$64(2^{-x})$ $\frac{64}{2^x}$ $64\left(\frac{1}{2}\right)^x = 64 \cdot \left(\frac{1}{2^x}\right)$
 ~~$64 \cdot 2^{-x} = \frac{64}{2^x}$~~

14.

~~_____~~ ~~_____~~ ~~_____~~

15.

$50(2^{2x+2})$ $25(2^{2x+1})$ $50(4^x)$
 $= 50(2^x \cdot 2^2) = 50 \cdot 2^2 \cdot 2^x$ $25 \cdot 2^{2x} \cdot 2^1$ $50 \cdot 4^x = 50 \cdot 2^{2x}$
 $= 50 \cdot 4 \cdot 2^x = 200 \cdot 2^x$ $50 \cdot 2^{2x}$

16.

~~_____~~ ~~_____~~ ~~_____~~

17.

$20(1.1^{2x})$ $20(1.1^{-1})^{-2x}$ $20(1.1^{\frac{1}{5}})^{5x}$
 $20(1.1^x)$ $20(1.1^{+1x})$ $20(1.1^{\frac{x}{5}})$
 $20(1.1^x)$ $20(1.1^x)$

Go

Topic: Using rules of exponents

Simplify each expression. Your answer should still be in exponential form.

18.

$7^3 \cdot 7^5 \cdot 7^2$ ~~_____~~

19.

$(3^4)^5 = 3^{20}$

20.

$(5^3)^4 \cdot 5^7 =$ ~~_____~~

21.

$x^3 \cdot x^5 = x^8$

22.

x^{-b} ~~_____~~

23.

$x^a \cdot x^b = x^{a+b}$

24.

$(x^a)^b =$ ~~_____~~

25.

$\frac{y^a}{y^b} = y^{a-b}$

26.

$\frac{(y^a)^c}{y^b} =$ ~~_____~~

27.

$\frac{(3^4)^6}{3^7} = \frac{3^{24}}{3^7} = 3^{17}$

28.

$\frac{r^5 s^3}{r s^2}$ ~~_____~~

29.

$\frac{x^5 y^{12} z^0}{x^0 y^9} = \frac{y^3}{x^5}$



Ready, Set, Go!

©2013 www.flickr.com/photos/zjootsuite

Ready

Topic: Standard form or Quadratic form

In each of the quadratic equations, $ax^2 + bx + c = 0$ identify the values of a, b and c.

1. $x^2 + 3x + 2 = 0$

a = 1

b = 3

c = 2

2. $2x^2 + 3x + 1 = 0$

a =

b =

c =

3. $x^2 - 4x - 12 = 0$

a = 1

b = -4

c = -12

Write each of the quadratic expressions in factored form.

4. $x^2 + 3x + 2$

~~_____~~

5. $2x^2 + 3x + 1$

$(2x+1)(x+1)$

6. $x^2 - 4x - 12$

~~_____~~

7. $x^2 - 3x + 2$

$(x-2)(x-1)$

8. $x^2 - 5x - 6$

~~_____~~

9. $x^2 - 4x + 4$

$(x-2)(x-2)$

10. $x^2 + 8x - 20$

~~_____~~

11. $x^2 + x - 12$

$(x+4)(x-3)$

12. $x^2 - 7x + 12$

~~_____~~



Solving Quadratic and Other Equations | 3.4

Set

Topic: Radical notation and rational exponents

Each of the expressions below can be written using either radical notation, $\sqrt[n]{a^m}$ or rational exponents $a^{\frac{m}{n}}$. Rewrite each of the given expressions in the form that is missing. Express in most simplified form.

	<u>Radical Form</u>	<u>Exponential Form</u>
13.	$\sqrt[3]{5^2}$	$5^{\frac{2}{3}}$
14.	6000	$16^{\frac{3}{4}}$
15.	$\sqrt[3]{5^7 \cdot 3^5}$	$5^{7 \cdot \frac{1}{3}} \cdot 3^{5 \cdot \frac{1}{3}}$ $5^{\frac{7}{3}} \cdot 3^{\frac{5}{3}}$
16.	9^{\frac{2}{3}} \cdot 9^{\frac{4}{3}}	$9^{\frac{2}{3}} \cdot 9^{\frac{4}{3}}$
17.	$\sqrt[5]{x^{13}y^{21}}$	$x^{\frac{13}{5}} \cdot y^{\frac{21}{5}}$
18.	$\sqrt[3]{27a^5b^2}$	27a^5b^2
19.	$\sqrt[5]{\frac{32x^{13}}{243y^{15}}}$	$\frac{(32x^{13})^{\frac{1}{5}}}{(243y^{15})^{\frac{1}{5}}}$ $2x^{\frac{13}{5}} / 3y^{\frac{15}{5}} = \frac{2x^{\frac{13}{5}}}{3y^3}$
20.	9^{\frac{3}{2}} s^{\frac{6}{3}} t^{\frac{2}{2}}	$9^{\frac{3}{2}} s^{\frac{6}{3}} t^{\frac{2}{2}}$

Solve the equations below, use radicals or rational exponents as needed.

21. $(x+5)^4 = 81$
 $(x+5)^4 = 3^4$
 $x+5 = \sqrt[4]{3^4}$
 $x = \pm 2$

22. $2(x-7)^5 + 3 = 67$
~~2(x-7)^5 + 3 = 67~~




Solving Quadratic and Other Equations | 3.4

Go

Topic: x-intercepts and y-intercepts for linear, exponential and quadratic

Given the function, find the x-intercept (s) and y-intercept if they exist and then use them to graph a sketch of the function.

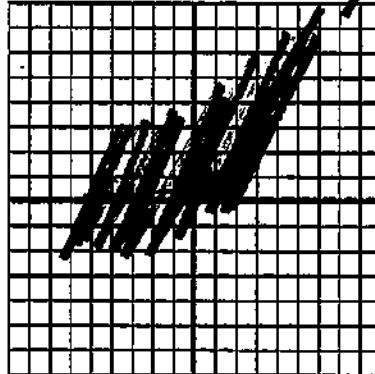
23. $f(x) = (x + 5)(x - 4)$ $x = -5 (-5, 0)$
 $x = 4 (4, 0)$



$x = 0$
 $y\text{-int?}$
 $y = (0+5)(0-4)$
 $y = -20$
 $(0, -20)$

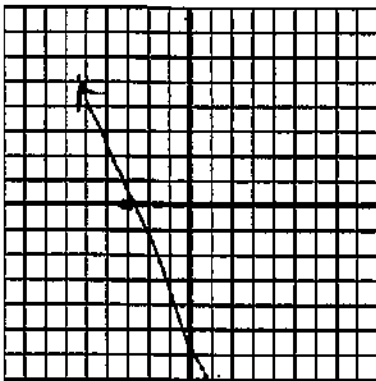
a. x-intercept(s): $(-5, 0)$
 $(4, 0)$ b. y-intercept: $(0, -20)$

24. $g(x) = 5(2^{x-1})$



a. x-intercept(s): ~~scribble~~ b. y-intercept: ~~scribble~~


25. $h(x) = -2(x + 3)$ $0 = -2x - 6$



$0 = \frac{-2x}{-2} - \frac{6}{-2}$
 $x = -3$
 $y = -2(0+3)$
 $y = -2(3)$
 $y = -6$

a. x-intercept(s): $(-3, 0)$ b. y-intercept: $(0, -6)$

26. $k(x) = x^2 - 4$



a. x-intercept(s): ~~scribble~~ b. y-intercept: ~~scribble~~



Name: _____ Solving Quadratic and Other Equations | 3.5

Ready, Set, Go!



Ready

© 2013 www.flickr.com/photos/rogersm/th

Topic: Converting measurement of area, area and perimeter.

While working with areas it sometimes essential to convert between units of measure, for example changing from square yards to square feet and so forth. Convert the areas below to the desired measure. (Hint: area is two dimensional, for example $1 \text{ yd}^2 = 9 \text{ ft}^2$ because 3 ft along each side of a square yard equals 9 square feet.)

1. $7 \text{ yd}^2 = ? \text{ ft}^2$
 $7 \text{ yd}^2 \times (3 \text{ ft})^2 = 63 \text{ ft}^2$
2. $5 \text{ ft}^2 = ? \text{ in}^2$
~~5 ft^2 x (12 in)^2 = 720 in^2~~
3. $1 \text{ mile}^2 = ? \text{ ft}^2$
 $1 \text{ mi}^2 \times (5280 \text{ ft})^2 = 2,787,840 \text{ ft}^2$
 $5280 \text{ ft} = 1 \text{ mile}$
4. $100 \text{ m}^2 = ? \text{ cm}^2$
~~100 m^2 x (100 cm)^2 = 10,000,000 cm^2~~
5. $300 \text{ ft}^2 = ? \text{ yd}^2$
 $300 \text{ ft}^2 \times (1 \text{ yd})^2 = \frac{300 \text{ yd}^2}{9} = \frac{100}{3} \text{ yd}^2$
6. $96 \text{ in}^2 = ? \text{ ft}^2$
~~96 in^2 x (1 ft)^2 = 96 ft^2~~

Set

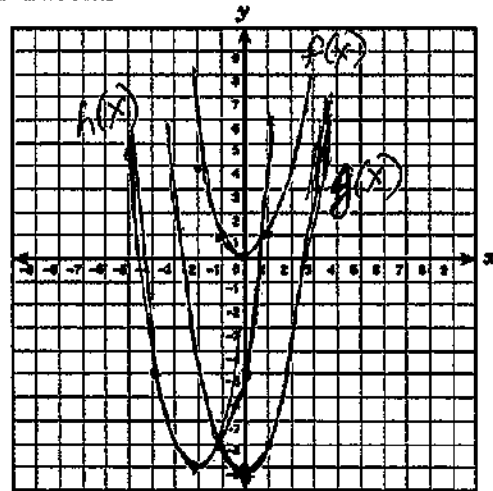
Topic: Transformations and Parabolas, Symmetry and Parabolas

7a. Graph each of the quadratic functions.

$$f(x) = x^2$$

$$g(x) = x^2 - 9$$

$$h(x) = (x + 2)^2 - 9$$



b. How do the functions compare to each other?

$g(x)$ translated down 9 units
 $h(x)$ translated left 2 units, then down 9 units

c. How do $g(x)$ and $h(x)$ compare to $f(x)$?

$g(x)$ is $f(x)$ shifted down 9
 $h(x)$ is $g(x)$ shifted down 9 and left 2

d. Look back at the functions above and identify the x-intercepts of $g(x)$. What are they?

$$g(x) = (x-3)(x+3) = 0$$

$$x = 3 \quad x = -3 \quad (3, 0) \quad (-3, 0)$$

e. What are the coordinates of the points corresponding to the x-intercepts in $g(x)$ in each of the other functions? How do these coordinates compare to one another?

$$f(x): (-3, 9), (3, 9)$$

$$h(x): (-3, -8), (3, -8)$$



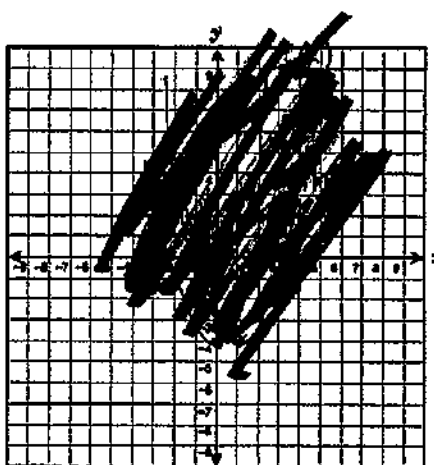
Solving Quadratic and Other Equations | 3.5

8a. Graph each of the quadratic functions.

$$f(x) = x^2$$

$$g(x) = x^2 - 4$$

$$h(x) = (x - 1)^2 - 4$$



b. How do the functions compare to each other?

c. How do $g(x)$ and $h(x)$ compare to $f(x)$?

d. Look back at the functions above and identify the x-intercepts of $g(x)$. What are they?

e. What are the coordinates of the points corresponding to the x-intercepts in $g(x)$ in each of the other functions? How do these coordinates compare to one another?

9. How can the transformations that occur to the function $f(x) = x^2$ be used to determine where the x-intercepts of the function's image will be?

$$f(x) = (x+a)^2 + b$$

x-intercepts: $(-b-a, 0), (-b-a, 0)$

Go

Topic: Function Notation and Evaluating Functions

Use the given functions to find the missing values. (Check your work using a graph.)

10. $f(x) = x^2 + 4x - 12$

a. $f(0) =$ [scribbled out]

b. $f(2) =$ [scribbled out]

c. $f(x) = 0, x =$ [scribbled out]

d. $f(x) = 20, x =$ [scribbled out]

11. $g(x) = (x - 5)^2 + 2$

a. $g(0) =$ (27)

b. $g(5) =$ (2)

c. $g(x) = 0$ [scribbled out]

d. $g(x) = 16, x =$ (5 ± √14)

$$g(0) = (0-5)^2 + 2 = 25 + 2 = 27$$

$$g(5) = (5-5)^2 + 2 = 0 + 2 = 2$$

$$0 = (x-5)^2 + 2$$

$$-2 = (x-5)^2$$

$$\sqrt{-2} = x-5$$

$$x = 5 \pm \sqrt{14}$$



Ready, Set, Go!

Ready

©2013 www.flckr.com/photos/NAPARAZZI

Topic: Finding x-intercepts for linear equations.

1. Find the x-intercept of each equation below. Write your answer as an ordered pair. Consider how the format of the given equation either facilitates for inhibits your work.

a. $3x + 4y = 12$ $(4, 0)$
 $3x + 4(0) = 12$
 $3x = 12$
 $x = 4$

b. $y = 5x - 3$ ~~scribble~~
~~scribble~~

c. $y - 5 = -4(x + 1)$ $(\frac{1}{4}, 0)$
 $y - 5 = -4(x + 1)$
 $0 - 5 = -4x - 4$
 $-1 = -4x$
 $x = \frac{1}{4}$

d. $y = -4x + 1$ ~~scribble~~

e. $y - 6 = 2(x + 7)$ $(-10, 0)$
 $0 - 6 = 2x + 14$
 $-20 = 2x$
 $x = -10$

f. $5x - 2y = 10$ ~~scribble~~

2. Which of the linear equation formats above facilitates your work in finding x-intercepts? Why?

STANDARD FORM IS GENERALLY THE EASIEST FOR FINDING X-INTERCEPTS

3. Using the same equations from question 1, find the y-intercepts. Write your answers as ordered pairs

a. $3x + 4y = 12$ $(0, 3)$
 $3(0) + 4y = 12$
 $y = 3$

b. $y = 5x - 3$ ~~scribble~~
~~scribble~~

c. $y - 5 = -4(x + 1)$ ~~scribble~~
~~scribble~~

d. $y = -4x + 1$ ~~scribble~~

e. $y - 6 = 2(x + 7)$ $(0, 20)$
 $y - 6 = 2(7)$
 $y = 14 + 6 = 20$

f. $5x - 2y = 10$ ~~scribble~~

4. Which of the formats above facilitate finding the y-intercept? Why?

SLOPE-INTERCEPT FORM IS THE EASIEST FOR FINDING Y-INTERCEPTS.

Solving Quadratic and Other Equations | 3.6

Set

Topic: Solve Quadratic Equations, Connecting Quadratics with Area

For each of the given quadratic equations, (a) describe the rectangle the equation fits with.

(b) What constraints have been placed on the dimensions of the rectangle?

5. $x^2 + 7x - 170 = 0$

$(x+17)(x-10) = 0$
 $x = 10$ $x = -17$

Constraints
 $x > 10$

6. $x^2 + 15x - 16 = 0$

~~Handwritten scribbles~~

7. $x^2 + 2x - 35 = 0$

$(x+7)(x-5) = 0$
 $x = 5$

$x > 5$

8. $x^2 + 10x - 80 = 0$

~~Large handwritten scribbles covering the right side of the page~~

Solve the quadratic equations below.

9. $x^2 + 7x - 170 = 0$

$(x+17)(x-10) = 0$
 $x = -17$
 $x = 10$

10. $x^2 + 15x - 16 = 0$

~~Handwritten scribbles~~

11. $x^2 + 2x - 35 = 0$

$(x+7)(x-5) = 0$
 $x = -7$
 $x = 5$

12. $x^2 + 10x - 80 = 0$

~~Large handwritten scribbles covering the bottom right of the page~~

Go

Topic: Factoring Expressions

Write each of the expressions below in factored form.

13. $x^2 - x - 132$

$(x-12)(x+11)$

14. $x^2 - 5x - 36$

~~Handwritten scribbles~~

15. $x^2 + 5x + 6$

$(x+3)(x+2)$

16. $x^2 + 13x + 42$

~~Handwritten scribbles~~

17. $x^2 + x - 56$

$(x+8)(x-7)$

18. $x^2 - x$

~~Handwritten scribbles~~

19. $x^2 - 8x + 12$

$(x-6)(x-2)$

20. $x^2 - 10x + 25$

~~Handwritten scribbles~~

21. $x^2 + 5x$

$x(x+5)$

Need Assistance? Check out these additional resources:

<https://www.khanacademy.org/math/trigonometry/polynomials-and-rational/quad-factoring/v/factoring-quadratic-expressions>



Ready, Set, Go!

©2013 www.flickr.com/photos/soldiersmediacenter

Ready

Topic: Symmetry and Distance

The given functions provide the connection between possible areas, $A(x)$, that can be created by a rectangle for a given side length, x , and a set amount of perimeter. You could think of it as the different amounts of area you can close in with a given amount of fencing as long as you always create a rectangular enclosure.

1. $A(x) = x(10 - x)$

Find the following:

a. $A(3) = 21$ b. $A(4) = 24$
 $A(3) = 3(7)$ $A(4) = 4(10-4)$

c. $A(6) = 24$ d. $A(x) = 0$ $x = 0, 10$
 $A(6) = 6(10-6)$ $A(x) = 0 = x(10-x)$

e. When is $A(x)$ at its maximum? Explain or show how you know.

$(5, 25)$ 5 is halfway between 4 and 6 or between 0 and 10 $A(5) = 5(10-5) = 25$

3. $A(x) = x(75 - x)$

Find the following:

a. $A(20) = 1,100$ b. $A(35) = 1,400$
 $A(20) = 20(75-20)$ $A(35) = 35(75-35)$

c. $A(40) = 1,400$ d. $A(x) = 0$
 $A(40) = 40(75-40) = 40(35)$ $0 = x(75-x)$
 $x = 0$
 $x = 75$

e. When is $A(x)$ at its maximum? Explain or show how you know.

$0 \leftarrow 75$
 $\frac{75}{2}$ $(37.5, 1,406.25)$
 $A(37.5) = 37.5(75-37.5)$

2. $A(x) = x(50 - x)$

Find the following:

a. $A(10)$ b. $A(20)$

c. $A(30)$ d. $A(x) = 0$

e. When is $A(x)$ at its maximum? Explain or show how you know.

4. $A(x) = x(48 - x)$

Find the following:

a. $A(10)$ b. $A(20)$

c. $A(28)$ d. $A(x) = 0$

e. When is $A(x)$ at its maximum? Explain or show how you know.

Solving Quadratic and Other Equations | 3.7

Set

Topic: Solving Quadratic Equations Efficiently

For each of the given quadratic equations find the solutions using an efficient method. State the method you are using as well as the solutions. You must use at least three different methods.

5. $x^2 + 17x + 60 = 0$
 $(x+12)(x+5) = 0$
 $x = -12, x = -5$

6. $x^2 + 16x + 39 = 0$
~~Handwritten scribbles~~

7. $x^2 + 7x - 5 = 0$
 $x = \frac{-7 \pm \sqrt{7^2 - 4(1)(-5)}}{2(1)}$
 $x = \frac{-7 \pm \sqrt{49 + 20}}{2}$
 $x = \frac{-7 \pm \sqrt{69}}{2}$

8. $3x^2 + 14x - 5 = 0$
~~Handwritten scribbles~~

9. $x^2 - 12x = -8$
 $x^2 - 12x + 36 = -8 + 36$
 $\sqrt{(x-6)^2} = \sqrt{28}$
 $x - 6 = \pm 2\sqrt{7}$
 $x = 6 \pm 2\sqrt{7}$

10. $x^2 + 6x = 7$
~~Handwritten scribbles~~

Summarize the process for solving a quadratic by the indicated strategy. Give examples along with written explanation, also indicate when it is best to use this strategy.

11. Completing the Square
 Completing the square is most easily done with #9, #10.
 $a=1$ b is even. Get $c = (\frac{b}{2})^2$

12. Factoring
~~Handwritten scribbles~~

13. Quadratic Formula
 when factoring and completing the square will not work,
 use the formula $x = \frac{-b \pm \sqrt{b^2 - 4ac}}{2a}$

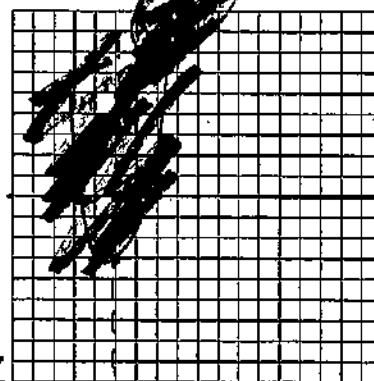
Go

Topic: Graphing quadratics and finding essential features of the graph. Solving systems of equations.

Graph the quadratic function and supply the desired information about the graph.

14. $f(x) = x^2 + 8x + 13$

- a. Line of symmetry:
- b. x-intercepts:
- c. y-intercept:
- d. vertex:



Solving Quadratic and Other Equations | 3.7

15. $f(x) = x^2 - 4x - 1$

a. Line of symmetry:

$x = 2$

b. x-intercepts:

$(2 + \sqrt{5}, 0)$ $(2 - \sqrt{5}, 0)$

c. y-intercept:

$(0, -1)$

d. vertex:

$V(2, -5)$

$x^2 - 4x + 4 = 1 + 4$

$(\frac{-4}{2})^2$

$(x-2)^2 = 5$

$(x-2)^2 - 5 = 0$

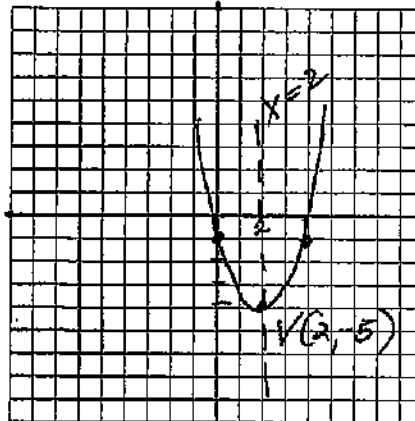
$y = 0 - 4(0) - 1$

$x = 0, y = -1$

$\sqrt{(x-2)^2} = \sqrt{5}$

$x - 2 = \pm\sqrt{5}$

$x = 2 \pm \sqrt{5}$



$x = 4$
 $y = 4^2 - 4(4) - 1$
 $= 16 - 16 - 1$
 $= -0 - 1 = -1$
 $\rightarrow \text{E}$

Solve each system of equations using an algebraic method and check your work!

16.

$\begin{cases} 3x + 5y = 15 \\ 3x - 2y = 6 \end{cases}$



17.

$\begin{cases} y = -7x + 12 \\ y = 5x - 36 \end{cases}$

$-7x + 12 = 5x - 36$
 $+7x + 36 + 7x + 36$

$\frac{48}{12} = \frac{12x}{12}$ $x = 4$

$y = -7(4) + 12$

$y = -28 + 12$ $y = -16$

$(4, -16)$

18.

$\begin{cases} y = 2x + 12 \\ y = 10x - x^2 \end{cases}$



19.

$\begin{cases} y = 24x - x^2 \\ y = 8x + 48 \end{cases}$

$24x - x^2 = 8x + 48$

$x^2 - 16x + 48 = 0$

$(x-12)(x-4) = 0$

$x = 12$
 $y = 8(12) + 48$
 $= 96 + 48$

$y = 144$
 $(12, 144)$

$x = 4$
 $y = 8(4) + 48$
 $= 32 + 48$
 $= 80$

$(4, 80)$

Name:

Solving Quadratic and Other Equations 3.8

Ready, Set, Go!



Ready

Topic: Simplifying radicals

©2013 www.flickr.com/photos/danlepfleming

Simplify each of the radicals below.

1. $\sqrt{8} = \sqrt{4 \cdot 2} = \sqrt{4} \cdot \sqrt{2} = 2\sqrt{2}$

2. $\sqrt{18} =$ ~~_____~~

3. $\sqrt{32} = \sqrt{16 \cdot 2} = 4\sqrt{2}$

4. $\sqrt{20} =$ ~~_____~~

5. $\sqrt{45} = \sqrt{9 \cdot 5} = 3\sqrt{5}$

6. $\sqrt{80} =$ ~~_____~~

7. What is the connection between the radicals above? Explain.

Questions #1 - 3 have $\sqrt{2}$
#4 - 6 have $\sqrt{5}$


Set

Topic: Determine the nature of the x-intercepts for each quadratic below.

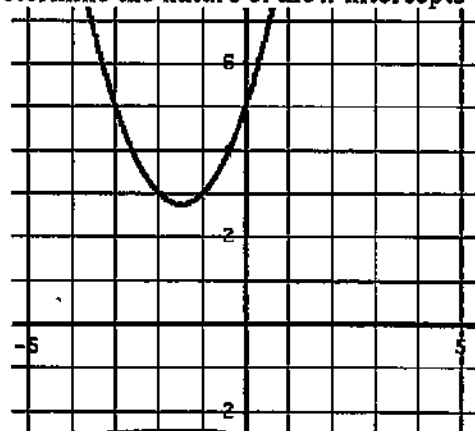
Given the quadratic function, its graph or other information below determine the nature of the x-intercepts (what type of number it is). Explain or show how you know.

(Whole numbers "W", Integers "Z", Rational "Q", Irrational "I", or finally, "not Real")

8. Determine the nature of the x-intercepts.



9. Determine the nature of the x-intercepts



NOT REAL

NO X-INTERCEPTS

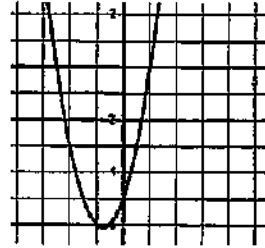


Solving Quadratic and Other Equations | 3.8

10. Determine the nature of the x-intercepts.

$$f(x) = x^2 + 4x - 24$$

12. Determine the nature of the x-intercepts.



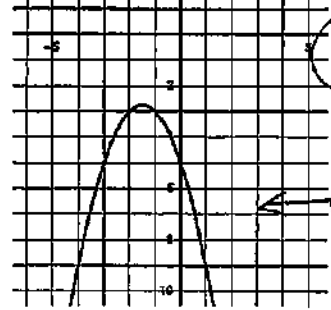
$$f(x) = 2x^2 + 3x - 5$$

11. Determine the nature of the x-intercepts.

$$g(x) = (2x - 1)(5x + 2)$$

$$g(x) = 10x^2 - 5x + 4x - 2 = 10x^2 - x - 2 = f(x)$$

13. Determine the nature of the x-intercepts.



Q: Rational

NOT REAL

14. Determine the nature of the x-intercepts.

$$r(t) = t^2 - 8t + 16$$

15. Determine the nature of the x-intercepts.

$$h(x) = 3x^2 - 5x + 9$$

NOT REAL

Determine the number of roots that each polynomial will have.

16. $x^5 + 7x^3 - x^2 + 4x - 21$

17. $4x^3 + 2x^2 - 3x - 9$

18. $2x^7 + 4x^5 - 5x^2 + 16x + 3$

roots: 3

Go

Topic: Finding x-intercepts for quadratics using factoring and quadratic formula.

If the given quadratic function can be factored then factor and provide the x-intercepts. If you cannot factor the function then use the quadratic formula to find the x-intercepts.

19. $A(x) = x^2 + 4x - 21$

$$(x+7)(x-3)$$

$x = -7, x = 3$

$(-7, 0), (3, 0)$

20. $B(x) = 5x^2 + 16x + 3$

[Scribbled out]

21. $C(x) = x^2 - 4x + 1$

$$x = \frac{4 \pm \sqrt{16 - 4(1)(1)}}{2}$$

$$= \frac{4 \pm \sqrt{12}}{2} = 2 \pm \frac{\sqrt{3}}{2}$$

22. $D(x) = x^2 - 16x + 4$

[Scribbled out]

23. $E(x) = x^2 + 3x - 40$

$$(x+8)(x-5)$$

$x = -8, x = 5$

$(-8, 0), (5, 0)$

24. $F(x) = 2x^2 - 3x - 9$

[Scribbled out]

25. $G(x) = x^2 - 3x$

$$x(x-3)$$

$(0, 0), (3, 0)$

$x = 0, x = 3$

26. $H(x) = x^2 + 6x + 8$

[Scribbled out]

27. $K(x) = 3x^2 - 11$

$$\left(\frac{\sqrt{33}}{3}, 0\right)$$

$$\left(-\frac{\sqrt{33}}{3}, 0\right)$$

Need Assistance? Check out these additional resources:

<https://www.khanacademy.org/math/algebra/quadratics/quadratic-formula/v/quadratic-formula-1>



Name: _____

Solving Quadratic and Other Equations | 3.9

Ready, Set, Go!



©2013 www.flickr.com/photos/leland

Ready

Topic: Classifying numbers according to set.

Classify each of the numbers represented below according to the sets to which they belong. If a number fits in more than one set then list all that apply.

(Whole numbers "W", Integers "Z", Rational "Q", Irrational "Q̄", Real "R", Complex "C")

- | | | |
|---------------------------------|--------------------------------|-------------------------------|
| 1. π Q \bar{Q} | 2. -13 Z | 3. $\sqrt{-16}$ C |
| 4. 0 W | 5. $\sqrt{75}$ \bar{Q} | 6. $\frac{9}{3}$ W |
| 7. $\sqrt{\frac{4}{9}}$ Q | 8. $5 + \sqrt{2}$ R | 9. $\sqrt{-40}$ C |

Set

Topic: Simplifying radicals, imaginary numbers

Simplify each radical expression below.

- | | |
|--------------------------------------------------------|-------------------------------------------------------------------------------------------------------------------------------------|
| 10. $3 + \sqrt{2} - 7 + 3\sqrt{2}$
_____ | 11. $\sqrt{5} - 9 + 8\sqrt{5} + 11 - \sqrt{5}$
$(-9 + 11) + (\sqrt{5} + 8\sqrt{5} - \sqrt{5})$
$2 + 8\sqrt{5}$ |
| 12. $\sqrt{12} + \sqrt{48}$
_____ | 13. $\sqrt{8} - \sqrt{18} + \sqrt{32} + 4\sqrt{2}$
$2\sqrt{2} - 3\sqrt{2} + 3\sqrt{2} + 4\sqrt{2}$
$3\sqrt{2}$ |
| 14. $11\sqrt{7} - 5\sqrt{7}$
_____ | 15. $7\sqrt{7} + 5\sqrt{3} - 3\sqrt{7} + \sqrt{3}$
$(7\sqrt{7} - 3\sqrt{7}) + (5\sqrt{3} + \sqrt{3})$
$4\sqrt{7} + 6\sqrt{3}$ |

Simplify. Express as a complex number using "i" if necessary.

- | | | |
|-----------------------------------------------------------------------|-----------------------------------------|-------------------------------------------------------------|
| 16. $\sqrt{-2} \cdot \sqrt{-2}$
_____ | 17. $7 + \sqrt{-25}$
$7 + 5i$ | 18. $(4i)^2$
_____ |
| 19. i^9
$(i^2)^4 \cdot i$
$(-1)^4 \cdot i$
$1 \cdot i = i$ | 20. $(\sqrt{-4})^3$
_____ | 21. $(2i)(5i)^2$
$2i \cdot 25i^2$
$50(-1)i$
$-50i$ |

Solving Quadratic and Other Equations | 3.9

Solve each quadratic equation over the set of complex numbers.

22. $x^2 + 100 = 0$

~~Handwritten work for problem 22, mostly obscured by heavy black scribbles.~~

23. $t^2 + 24 = 0$

$$t^2 = -24$$

$$t = \pm \sqrt{-24} = \pm 2\sqrt{6}i$$

$$t = \pm 2i\sqrt{6}$$

24. $x^2 - 6x + 13 = 0$

~~Handwritten work for problem 24, mostly obscured by heavy black scribbles.~~

25. $r^2 - 2r + 5 = 0$

$$(r - 1)^2 + 4 = 0$$

$$r = \frac{2 \pm \sqrt{4 - 4(1)(5)}}{2}$$

$$r = \frac{2 \pm \sqrt{-16}}{2}$$

$$r = \frac{2 \pm 4i}{2}$$

$$r = 1 \pm 2i$$

Go

Topic: Solve quadratic equations.

Use the discriminant to determine the nature of the roots to the quadratic equation.

26. $x^2 - 5x + 7 = 0$

~~Handwritten work for problem 26, mostly obscured by heavy black scribbles.~~

27. $x^2 - 5x + 6 = 0$

$$\sqrt{25 - 4(6)} = \sqrt{25 - 24} = 1; W$$

28. $2x^2 - 5x + 5 = 0$

~~Handwritten work for problem 28, mostly obscured by heavy black scribbles.~~

29. $x^2 + 7x + 2 = 0$

$$\sqrt{49 - 4(1)(2)} = \sqrt{49 - 8} = \sqrt{41} \text{ } \odot$$

30. $2x^2 + 7x + 6 = 0$

~~Handwritten work for problem 30, mostly obscured by heavy black scribbles.~~

31. $2x^2 + 7x + 7 = 0$

$$\sqrt{49 - 4(2)(7)} = \sqrt{49 - 56} = \sqrt{-7} \text{ } \odot$$

32. $2x^2 - 7x + 6 = 0$

~~Handwritten work for problem 32, mostly obscured by heavy black scribbles.~~

33. $2x^2 + 7x - 6 = 0$

$$\sqrt{49 - 4(2)(-6)} = \sqrt{49 + 48} = \sqrt{97} \text{ } \odot$$

34. $x^2 + 6x + 9 = 0$

~~Handwritten work for problem 34, mostly obscured by heavy black scribbles.~~

Solve the quadratic equations below using an appropriate method.

35. $m^2 + 15m + 56 = 0$

$$(m + 8)(m + 7) = 0$$

$$m = -8, -7$$

36. $5x^2 - 3x + 7 = 0$

~~Handwritten work for problem 36, mostly obscured by heavy black scribbles.~~

37. $x^2 - 10x + 21 = 0$

$$(x - 7)(x - 3) = 0$$

$$x = 7, 3$$

38. $6x^2 + 7x - 5 = 0$

~~Handwritten work for problem 38, mostly obscured by heavy black scribbles.~~

Name: Solving Quadratic and Other Equations | 3.10

Ready, Set, Go!



Ready

Topic: Attributes of quadratics and other functions

©2013 www.flickr.com/photos/milongadas

1. Summarize what you have learned about quadratic functions to this point. In addition to your written explanation provide graphs, tables and examples to illustrate what you know. *ANSWERS WILL VARY*

2. In prior work you have learned a great deal about both linear and exponential functions. Compare and contrast linear and exponential functions with quadratic functions. What similarities if any are there and what differences are there between linear, exponential and quadratic functions?

[Handwritten scribbles and illegible text covering the answer area]

© 2013 MATHEMATICS VISION PROJECT | MVP

In partnership with the Utah State Office of Education

Licensed under the Creative Commons Attribution-NonCommercial-ShareAlike 3.0 Unported license



Solving Quadratic and Other Equations | 3.10

Set

Topic: Operations on different types of numbers

3. The Natural numbers, \mathbb{N} , are just that the numbers that come naturally or the counting numbers. As any child first learns numbers they learn 1, 2, 3, ... What operations on the Natural numbers would cause the need for other types of numbers? What operation on Natural numbers create a need for Integers or Rational numbers and so forth. (Give examples and explain.)

SUBTRACTION OF NATURAL NUMBERS CREATES A NEED FOR THE INTEGERS. DIVISION OF NATURAL NUMBERS CREATES THE NEED FOR RATIONAL NUMBERS.

In each of the problems below use the given items to determine whether or not it is possible *always, sometimes* or *never* to create a new element* that is in the desired set.

4. Using the operation of addition and elements from the Integers, \mathbb{Z} , [always, sometime, never] an element of the Irrational numbers, \mathbb{Q} , will be created. Explain.

5. Consider the equation $a - b = c$, where $a \in \mathbb{N}$ and $b \in \mathbb{N}$, c will be an Integer, \mathbb{Z} [always, sometimes, never]. Explain.

ALWAYS. IF BOTH A AND B ARE INTEGERS, SUBTRACTING ONE FROM THE OTHER WILL EITHER BE A POSITIVE OR NEGATIVE WHOLE NUMBER (AN INTEGER)

6. Consider the equation $a \div b = c$, where $a \in \mathbb{Z}$ and $b \in \mathbb{Z}$, then is $c \in \mathbb{Z}$ [sometimes, always, never]. Explain.

*The numbers in any given set of numbers may be referred to as elements of the set. For example, the Rational number set, \mathbb{Q} , contains elements or numbers that can be written in the form $\frac{a}{b}$ where a and b are integer values ($b \neq 0$).



Solving Quadratic and Other Equations | 3.10

7. Using the operation of subtraction and elements from the Irrationals, $\bar{\mathbb{Q}}$, an element of the Irrational numbers, $\bar{\mathbb{Q}}$, will be created [always, sometime, never]. Explain.

ALWAYS / SOMETIMES. IF THE SAME IRRATIONAL NUMBER IS SUBTRACTED FROM ITSELF, YOU WILL GET A WHOLE NUMBER. HOWEVER, THIS IS THE ONLY EXAMPLE OF SUBTRACTING IRRATIONAL NUMBERS THAT WILL NOT GIVE YOU ANOTHER IRRATIONAL NUMBER.

8. If two Complex numbers, \mathbb{C} , are subtracted the result will [always, sometimes, never] be a Complex number, \mathbb{C} . Explain.

~~SOMETIMES. IF TWO COMPLEX NUMBERS ARE SUBTRACTED, THE RESULT WILL BE A COMPLEX NUMBER.~~

Go

Topic: Solving all types of Quadratic Equations, Simplifying Radicals

Make a prediction as to the nature of the solutions for each quadratic (Real, Complex, Integer, etc.) then solve each of the quadratic equations below using an appropriate and efficient method. Give the solutions and compare to your prediction.

9. $-5x^2 + 3x + 2 = 0$

$$x = \frac{-3 \pm \sqrt{9 - 4(-5)(2)}}{2(-5)}$$

Prediction:

$$x = \frac{-3 \pm \sqrt{9 + 40}}{-10}$$

Solutions:

$$x = \frac{-3 \pm \sqrt{49}}{-10}$$

$$x = \frac{-3 \pm 7}{-10} \quad x = \frac{4}{-10} \quad x = \frac{2}{5}$$

11. $x^2 + 3x - 12 = 0$

$$x = \frac{-3 \pm \sqrt{9 - 4(1)(-12)}}{2}$$

Prediction:

$$x = \frac{-3 \pm \sqrt{9 + 48}}{2}$$

Solutions:

$$x = \frac{-3 \pm \sqrt{57}}{2}$$

10. $x^2 + 3x + 2 = 0$

Prediction:

Solutions:

12. $4x^2 - 19x - 5 = 0$

Prediction:

Solutions:



Solving Quadratic and Other Equations | 3.10

Simplify each of the radical expressions. Use rational exponents if desired.

13. $\sqrt[4]{81x^8y^{12}}$
 $\sqrt[4]{81} \sqrt[4]{x^8} \sqrt[4]{y^{12}}$
 $(3x^2y^3)$

14. $\sqrt{\frac{a^7b^{10}}{a^3}}$
~~Handwritten work~~

15. $\sqrt[5]{625x^{12}}$
 $\sqrt[5]{625} \sqrt[5]{x^{12}}$
 $\sqrt[5]{5^4} \sqrt[5]{x^{12}} = 5^{\frac{4}{5}} \cdot x^{\frac{12}{5}}$

16. $(\sqrt{n})^5$
~~Handwritten work~~

17. $\sqrt[3]{-27}$
 (-3)

18. $(\sqrt{8})(\sqrt{3^2})(2)$
~~Handwritten work~~

Fill in the table so each expression is written in radical form and with rational exponents.

	Radical Form	Exponential Form
19.	$\sqrt[4]{8^3}$	$8^{\frac{3}{4}}$
20.	Handwritten work	$256^{\frac{3}{4}}$
21.	$\sqrt[4]{2^7 \cdot 4^5}$	Handwritten work
22.	Handwritten work	$16^{\frac{3}{2}} \cdot 4^{\frac{1}{2}}$
23.	$\sqrt[10]{x^{23}y^{31}}$	$x^{\frac{23}{10}} y^{\frac{31}{10}}$
24.	$\sqrt[5]{64a^9b^{18}}$	Handwritten work

