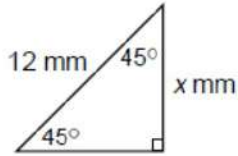
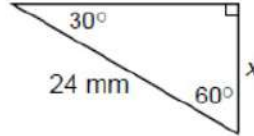


Find the value of x .

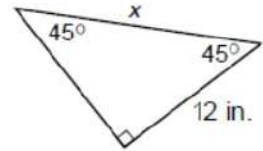
1.




2.




3.



7. Find the length of a diagonal of a square with sides 10 in. long.



8. Find the length of a side of a square whose diagonal is 4 cm.



9. One side of an equilateral triangle measures 6 cm. Find the measure of an altitude of the triangle.

