


Whole Class Loops & Groups

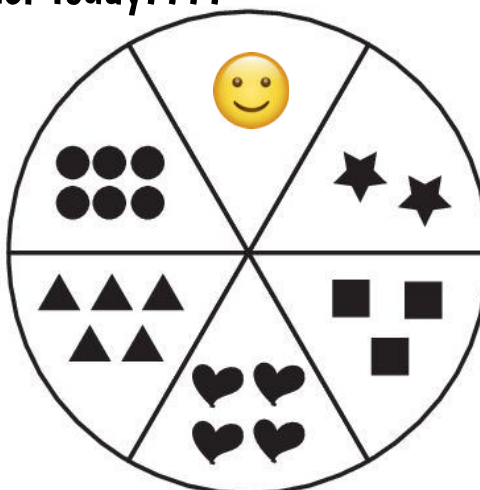
Will you beat the teacher today????



Loops Spinner

Word Bank

- 1 Emoji
- 2 Stars
- 3 Squares
- 4 Hearts
- 5 Triangles
- 6 Dots




Groups Spinner

	Teacher:	Students:
1st Turn	___ loops of ___ <small>(number) (number) (word)</small> Equation: ___ x ___ = ___ Repeated Addition: _____ = ___	___ loops of ___ <small>(number) (number) (word)</small> Equation: ___ x ___ = ___ Repeated Addition: _____ = ___
2nd Turn	___ loops of ___ <small>(number) (number) (word)</small> Equation: ___ x ___ = ___ Repeated Addition: _____ = ___	___ loops of ___ <small>(number) (number) (word)</small> Equation: ___ x ___ = ___ Repeated Addition: _____ = ___
3rd Turn	___ loops of ___ <small>(number) (number) (word)</small> Equation: ___ x ___ = ___ Repeated Addition: _____ = ___	___ loops of ___ <small>(number) (number) (word)</small> Equation: ___ x ___ = ___ Repeated Addition: _____ = ___
4th Turn	___ loops of ___ <small>(number) (number) (word)</small> Equation: ___ x ___ = ___ Repeated Addition: _____ = ___	___ loops of ___ <small>(number) (number) (word)</small> Equation: ___ x ___ = ___ Repeated Addition: _____ = ___
Find The SUM	___ + ___ + ___ + ___ = ___ <small>Turn #1 Answer Turn #2 Answer Turn #3 Answer Turn #4 Answer TOTAL SUM</small>	___ + ___ + ___ + ___ = ___ <small>Turn #1 Answer Turn #2 Answer Turn #3 Answer Turn #4 Answer TOTAL SUM</small>

Whoever has the HIGHEST SUM wins the game!!!!

Partner Loops & Groups Game Sheet

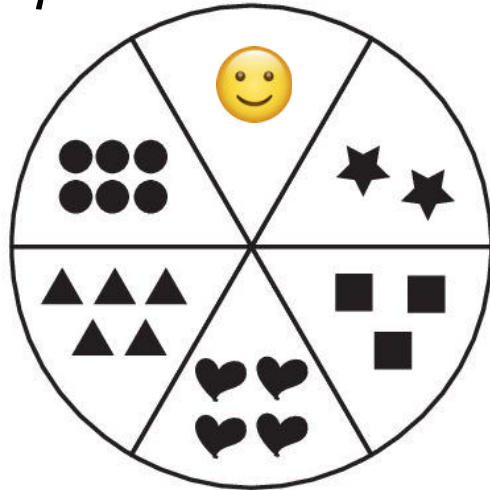
Who will win today???



Loops Spinner

Word Bank

- 1 Emoji
- 2 Stars
- 3 Squares
- 4 Hearts
- 5 Triangles
- 6 Dots



Groups Spinner

	Player #1: _____	Player #2: _____
1st Turn	___ loops of ___ <small>(number) (number) (word)</small> Equation: ___ × ___ = ___ Repeated Addition: _____ = ___	___ loops of ___ <small>(number) (number) (word)</small> Equation: ___ × ___ = ___ Repeated Addition: _____ = ___
2nd Turn	___ loops of ___ <small>(number) (number) (word)</small> Equation: ___ × ___ = ___ Repeated Addition: _____ = ___	___ loops of ___ <small>(number) (number) (word)</small> Equation: ___ × ___ = ___ Repeated Addition: _____ = ___
3rd Turn	___ loops of ___ <small>(number) (number) (word)</small> Equation: ___ × ___ = ___ Repeated Addition: _____ = ___	___ loops of ___ <small>(number) (number) (word)</small> Equation: ___ × ___ = ___ Repeated Addition: _____ = ___
4th Turn	___ loops of ___ <small>(number) (number) (word)</small> Equation: ___ × ___ = ___ Repeated Addition: _____ = ___	___ loops of ___ <small>(number) (number) (word)</small> Equation: ___ × ___ = ___ Repeated Addition: _____ = ___
Find The SUM	___ + ___ + ___ + ___ = ___ <small>Turn #1 Answer Turn #2 Answer Turn #3 Answer Turn #4 Answer TOTAL SUM</small>	___ + ___ + ___ + ___ = ___ <small>Turn #1 Answer Turn #2 Answer Turn #3 Answer Turn #4 Answer TOTAL SUM</small>

Whoever has the HIGHEST SUM wins the game!!!!