


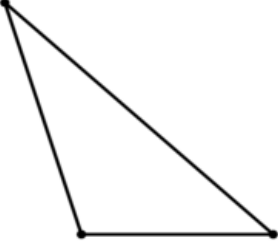



2. At the Zoo of Acadiana there are 21 young alligators and 15 adult alligators. The alligators are placed equally into 4 areas. How many alligators are in each area? (6 pts)

3. Mrs. Granger's math class starts at 9:15. They do 3 fluency activities that each last 5 minutes. Just when they finish all of the fluency, the fire alarm goes off. When they return to the room after the drill, it is 9:46. How many minutes did the fire drill last? (6 pts)

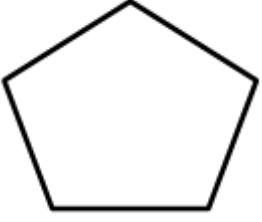
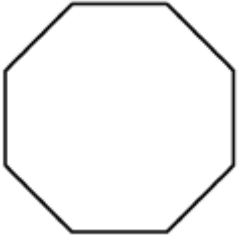

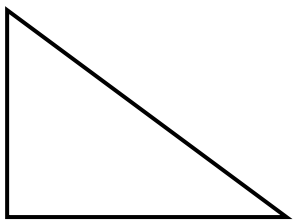
4. Bobby says this is a square, Suzie said it is a rectangle. Who is correct? Explain why. (2pts)



5. Place a (✓) check in the column that describes each shape. (16 pts)

Shape	All sides are equal	All sides are not equal	At least 1 right angle	At least 1 set of parallel sides
				
				
				
				

6. Write the number of each attribute you see on each shape. (16 pts)

Shape	Angles	Right Angles	Parallel Sides	Equal Sides
				
				
				
				

Rubric

1a	3 pt correct answer	3 points
1b	3 pt correct answer	3 points
1c	3 pt correct answer	3 points
1d	3 pt correct answer	3 points
1e	3 pt correct answer	3 points
2	3 pt per step	6 points
3	3 pt per step	6 points
4	2 pt correct explanation	2 points
5	1 pt each correct box	16 points
6	1 pt each correct box	16 points
	Total	61 points