

Name _____


HANDS ON Lesson 8.4

Measure with an Inch Ruler




COMMON CORE STANDARD—2.MD.1
Measure and estimate lengths in standard units.

Measure the length to the nearest inch.



_____ inches



_____ inches



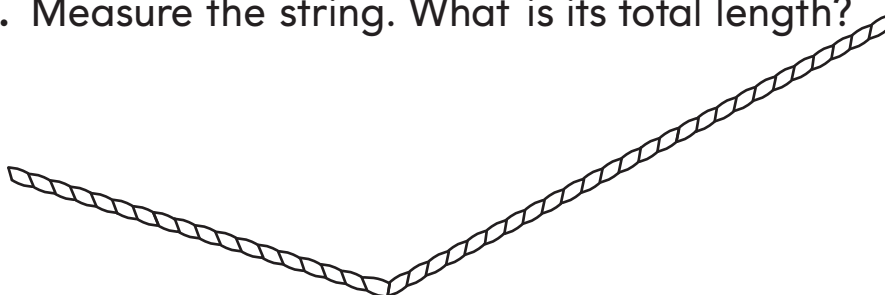
_____ inches



_____ inches

Problem Solving

5. Measure the string. What is its total length?



_____ inches

Lesson Check (2.MD.1)

1. Use an inch ruler. What is the length to the nearest inch?



_____ inches

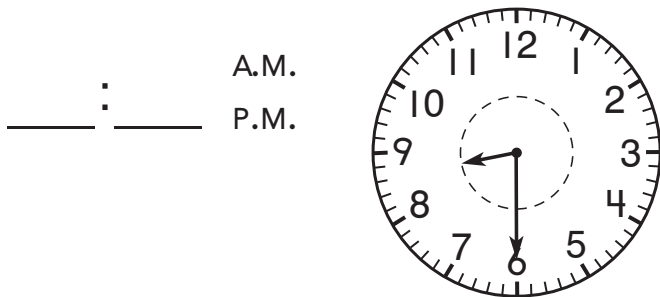
2. Use an inch ruler. What is the length to the nearest inch?



_____ inches

Spiral Review (2.OA.2, 2.MD.1, 2.MD.7)

3. The clock shows the time that Jen got to school. What time did Jen get to school?



4. What is the difference?

$$13 - 5 = \underline{\quad}$$

5. Each color tile is about 1 inch long. About how long is the ribbon?

about _____ inch
 inches

