

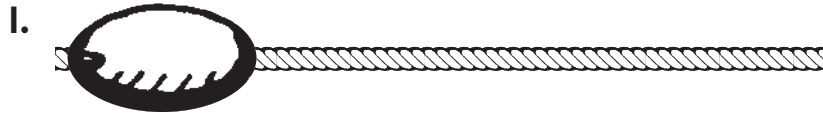
Name _____

Estimate Lengths in Inches



COMMON CORE STANDARD—2.MD.3
Measure and estimate lengths in standard units.

The bead is 1 inch long.
Circle the best estimate for the length of the string.



1 inch 4 inches 7 inches



3 inches 6 inches 9 inches



2 inches 3 inches 6 inches



2 inches 5 inches 8 inches

Problem Solving



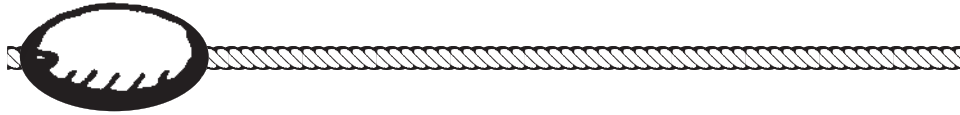
Solve. Write or draw to explain.

5. Ashley has some beads. Each bead is 2 inches long. How many beads will fit on a string that is 8 inches long?

_____ beads

Lesson Check (2.MD.3)


1. The bead is 1 inch long. Estimate the length of the string.



_____ inches

Spiral Review (2.OA.1, 2.NBT.6, 2.MD.7)

2. Draw hands on the clock to show 5 minutes after 6.



3. Ella read 16 pages of her book on Monday and 26 pages on Tuesday. There are 64 pages in the book. How many more pages are left for Ella to read?

_____ pages

4. What is the sum?

$$38 + 24 = \underline{\hspace{2cm}}$$