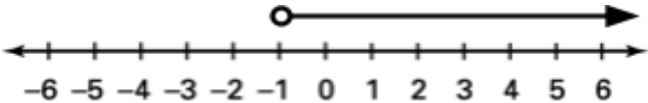
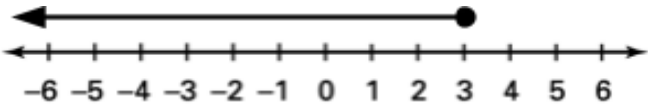
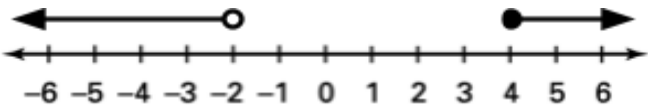
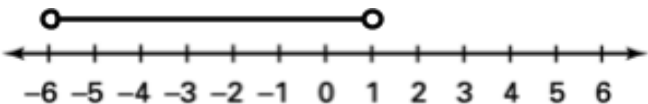



Words	Inequality	Graph	Interval Notation
all real numbers greater than -1	$x > -1$		$(-1, \infty)$
all real numbers less than or equal to 3	$x \leq 3$		$(-\infty, 3]$
all real numbers less than -2 or greater than or equal to 4	$x < -2$ or $x \geq 4$		$(-\infty, -2)$ or $[4, \infty)$
all real numbers between -6 and 1	$-6 < x < 1$		$(-6, 1)$
all real numbers greater than or equal to 0 and less than 5.5	$x \geq 0$ and $x < 5.5$		$[0, 5.5)$