

# IM K.4.C Section Review Practice Problems

There are 5 red apples and 3 green apples in the bowl.

How many apples are in the bowl?

---

---

---



Circle the expression that matches the story problem.

$5 + 3$

$5 - 3$

$8 - 5$

Draw a line from each expression to the matching drawing.

$5 + 2$



$6 - 3$



$6 + 2$





$5 - 2$



Find the value of the expression

Show your thinking using objects, drawings, numbers, or words.

$3 + 5$



Find the value of the expression




Show your thinking using objects, drawings, numbers, or words.

$3 + 5$



Find the value of the expression

Show your thinking using objects, drawings, numbers, or words.



$$7 - 1$$



Find the value of the expression



Show your thinking using objects, drawings, numbers, or words.

$$7 - 1$$



Find the value of the expression

Show your thinking using objects, drawings, numbers, or words.



$6 + 0$

---

---

$6 + 1$

---

---

---

---



Find the value of the expression

Show your thinking using objects, drawings, numbers, or words.



$6 + 0$



$6 + 1$






## Exploration

Circle the expression that shows 8.

$1 + 6$

$5 + 3$

$6 + 3$



What other expressions can you find that are equal to 8?