

Homework

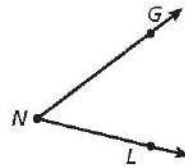
Draw each geometric figure.

1. a point

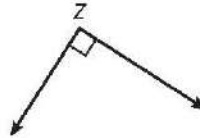
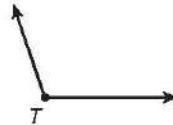
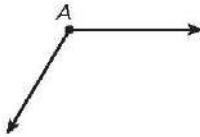
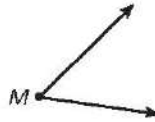
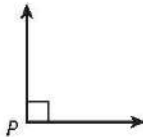
2. a ray

3. an angle

4. Name the angle shown. _____



Look at the angles below.



5. Which angles are right angles? _____

6. Which angles are acute angles? _____

7. Which angles are obtuse angles? _____