

Homework

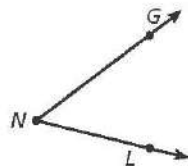
Draw each geometric figure. *Check students' drawings.*

1. a point

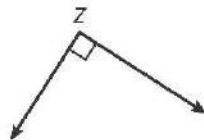
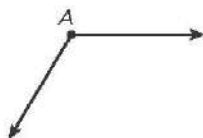
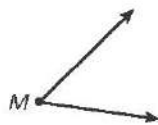
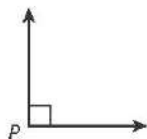
2. a ray

3. an angle

4. Name the angle shown. *∠GNL or ∠LNG*



Look at the angles below.



5. Which angles are right angles? *∠P and ∠Z*

6. Which angles are acute angles? *∠M and ∠V*

7. Which angles are obtuse angles? *∠A and ∠T*