

Remembering

Add or subtract.

$$\begin{array}{r} 1. \quad 465 \\ + 184 \\ \hline \end{array}$$

$$\begin{array}{r} 2. \quad 579 \\ - 498 \\ \hline \end{array}$$

$$\begin{array}{r} 3. \quad 600 \\ - 285 \\ \hline \end{array}$$

$$\begin{array}{r} 4. \quad 539 \\ + 281 \\ \hline \end{array}$$

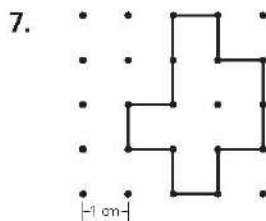
Solve each problem. Label your answers.

Show your work.

5. Kenzie bakes 9 oatmeal cookies. Kenzie bakes 7 fewer cookies than Lisa. How many oatmeal cookies does Lisa bake?
- _____

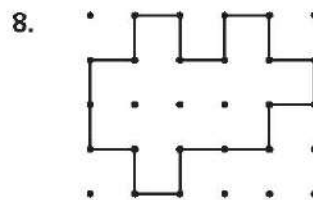
6. Hayden reads 8 books over the summer. He reads 5 more books than Max. How many books does Max read?
- _____

Find the perimeter and area of each figure. Remember to include the correct units in your answers.



Perimeter = _____

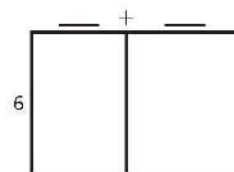
Area = _____



Perimeter = _____

Area = _____

9. **Stretch Your Thinking** Fill in the unknown numbers. Explain how you solved.



Area = 54 sq cm