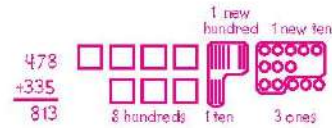


## Remembering

Solve the problem using a numerical method and a proof drawing.


1. The stadium snack bar has 478 cups in the dispenser. The manager opens up a new package, and puts 335 more cups into the dispenser. How many cups are now in the dispenser?



813 cups

Draw and label Comparison Bars to show each situation.


2. Marissa has 4 fewer strawberries than Amy has.



3. Carter has 6 more books than Juliana has.



Circle every name that describes the figure.



4. quadrilateral

parallelogram

rectangle

square



5. quadrilateral

parallelogram

rectangle

trapezoid



6. quadrilateral

parallelogram

rectangle

square

7. **Stretch Your Thinking** Draw a shape that has a perimeter of 12 cm and an area of 6 sq cm.

Check student's drawing. Possible drawing is shown.

