

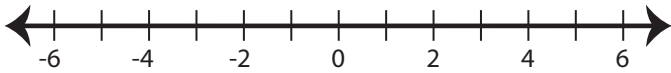
Name : _____

Score : _____

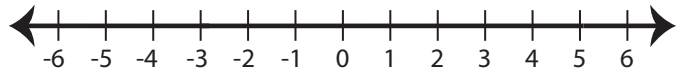
Graphing Inequalities

Graph the inequality :

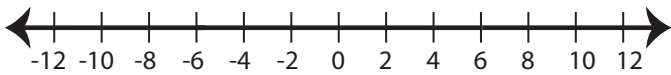
1) $x \geq -2$



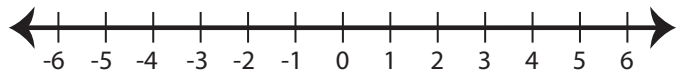
2) $x < 5$



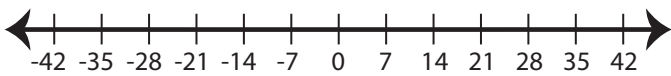
3) $x \leq 6$



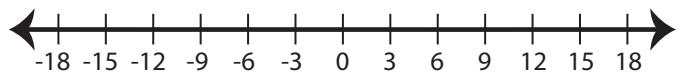
4) $x > 1$



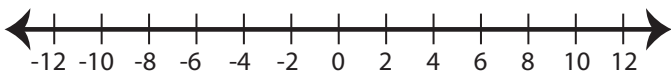
5) $x < -14$



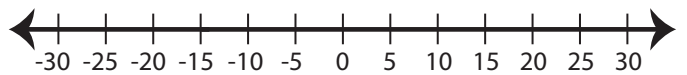
6) $x \leq 9$



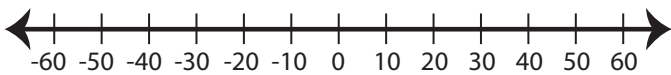
7) $x > -2$



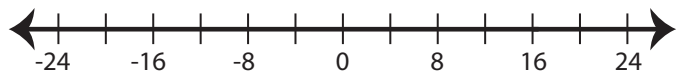
8) $x \geq -15$



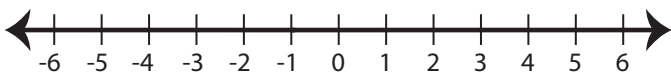
9) $x \leq -10$



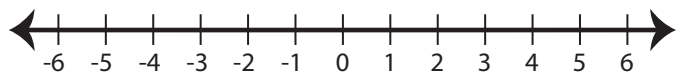
10) $x > 16$



11) $x > -1$



12) $x \geq -3$



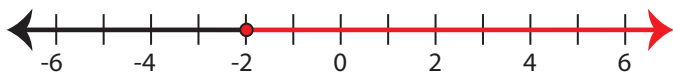
Name : _____

Score : _____

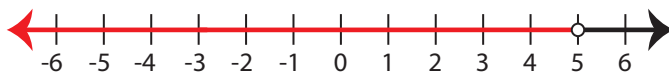
Answer key

Graph the inequality :

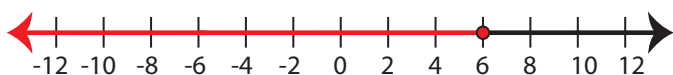
1) $x \geq -2$



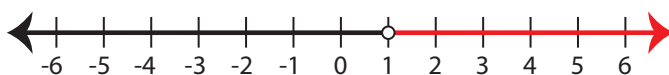
2) $x < 5$



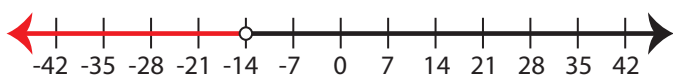
3) $x \leq 6$



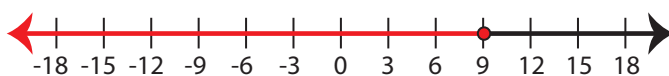
4) $x > 1$



5) $x < -14$



6) $x \leq 9$



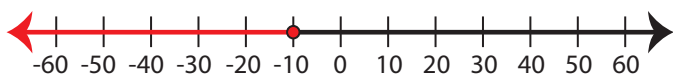
7) $x > -2$



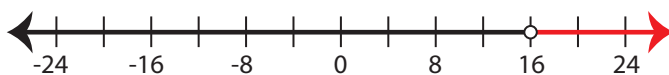
8) $x \geq -15$



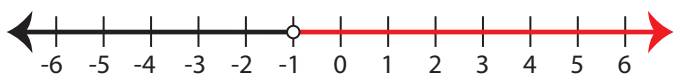
9) $x \leq -10$



10) $x > 16$



11) $x > -1$



12) $x \geq -3$

