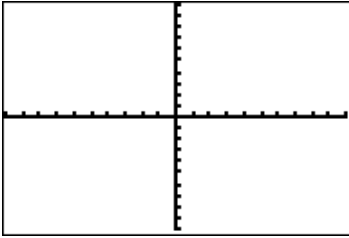
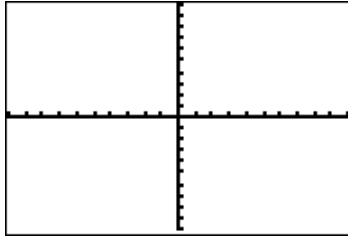


Graph each function below. Set your window on your calculator for the standard window (Zoom 6) for problems 1-9 and the trig window (Zoom 7) on problems 10-15.

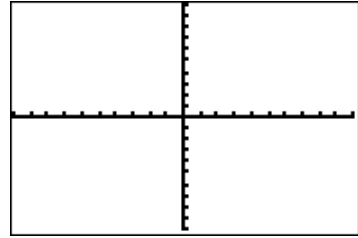
1.  $f(x) = x$



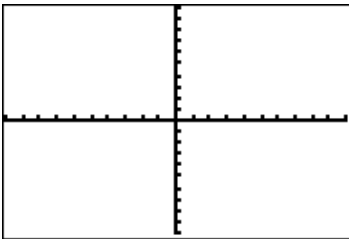
2.  $f(x) = x^2$



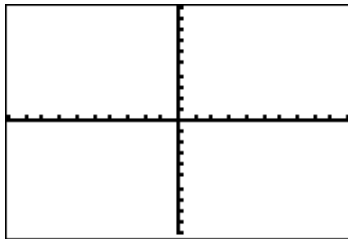
3.  $f(x) = x^3$



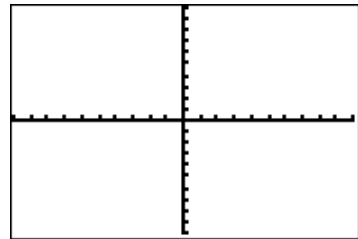
4.  $f(x) = \sqrt{x}$



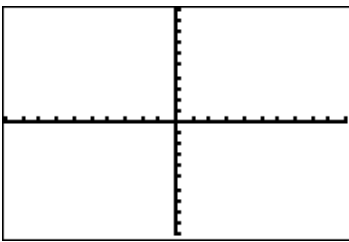
5.  $f(x) = \sqrt[3]{x}$



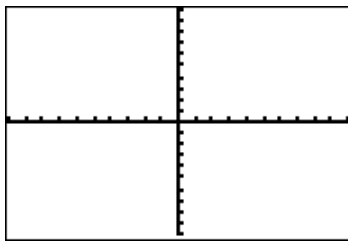
6.  $f(x) = \frac{1}{x}$



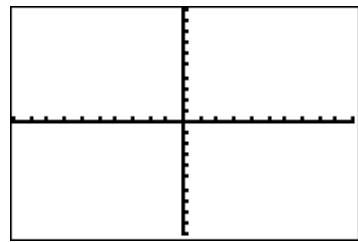
7.  $f(x) = |x|$



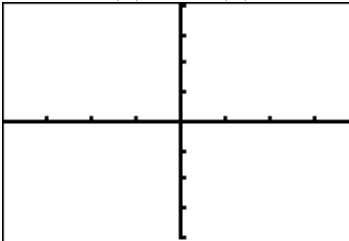
8.  $f(x) = e^x$



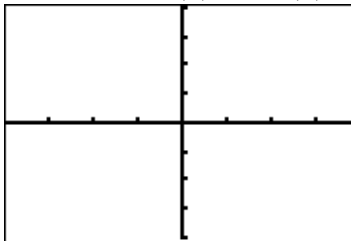
9.  $f(x) = \ln x$



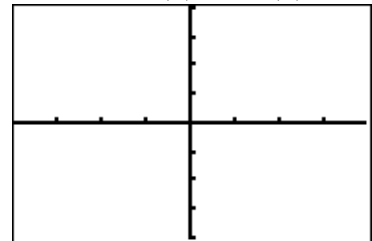
10.  $f(x) = \sin(x)$



11.  $f(x) = \cos(x)$



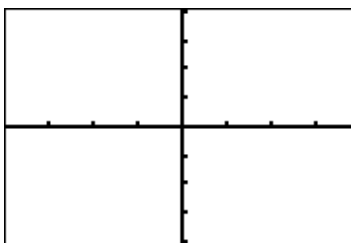
12.  $f(x) = \tan(x)$



13.  $f(x) = \csc(x)$



14.  $f(x) = \sec(x)$



15.  $f(x) = \cot(x)$

