

Name _____

Date _____

Directions: Use the RDW process for each problem. Use a letter to represent the solution.

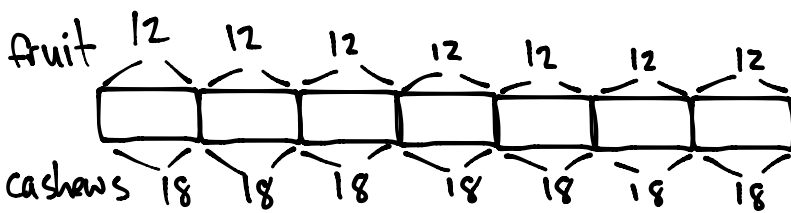
1. There are 60 minutes in 1 hour. Use a tape diagram to find the total number of minutes in 6 hours and 15 minutes.



$$\begin{aligned}
 &60 \times 6 + 15 \\
 &10 \times 6 \times 6 + 15 \\
 &10 \times 36 + 15 \\
 &360 + 15 = 375
 \end{aligned}$$

There are 375 minutes in 6 hours 15 minutes.

2. Ms. Lemus buys 7 boxes of snacks. Each box has 12 packets of fruit snacks and 18 packets of cashews. How many snacks did she buy altogether?



$$\begin{aligned}
 &7 \times (12 + 18) = 7 \times 30 \\
 &= 7 \times 3 \times 10 \\
 &= 21 \times 10 \\
 &= 210
 \end{aligned}$$

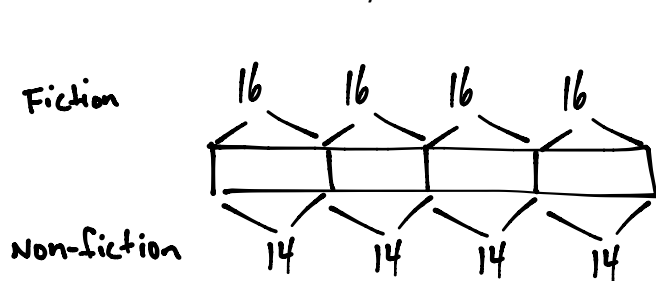
Ms. Lemus bought 210 snacks altogether.

3. Tamara wants to buy a tablet that costs \$437. She saves \$50 a month for 9 months. Does she have enough money to buy the tablet? Explain why or why not.

$$\begin{aligned}
 &9 \times 50 = 9 \times 5 \times 10 \\
 &= 45 \times 10 \\
 &= 450
 \end{aligned}$$

Since \$450 is greater than \$437, Tamara will have enough money to buy the tablet.

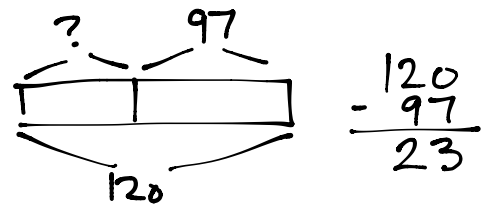
4. Mr. Ramirez receives 4 sets of books. Each set has 16 fiction books and 14 non-fiction books. He puts 97 books in his library and donates the rest of his books. How many books does he donate?



$$4 \times 30 = 6$$

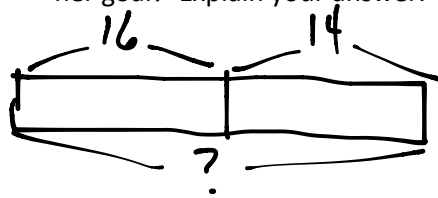
$$6 = 120$$

He has 120 books.



He donates 23 books.

5. Celia sells calendars for a fundraiser. Each calendar costs \$9. She sells 16 calendars to her family members and 14 calendars to the people in her neighborhood. Her goal is to earn \$300. Does Celia reach her goal? Explain your answer.



$$30 \times 9 = 270$$

Celia earned \$270.

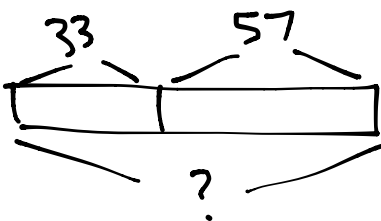
$$\begin{array}{r} 300 \\ - 270 \\ \hline 30 \end{array}$$

Celia missed her goal by \$30.

$$\begin{array}{r} 16 \\ + 14 \\ \hline 30 \end{array}$$

Celia sold 30 calendars

6. The video store sells science and history movies for \$5 each. How much money does the video store make if it sells 33 science movies and 57 history movies?



$$90 \times 5 = 450$$

The video store earned \$450.

$$\begin{array}{r} 57 \\ + 33 \\ \hline 90 \end{array}$$

The store sold 90 movies.