

Name _____

Date _____

1. Match the object with its approximate weight.


The matching exercise consists of four objects on the left and four weights on the right. Blue lines connect the objects to their approximate weights:

- Water bottle → 100 grams
- Paperclip → 10 grams
- Four pennies → 1 gram
- Apple → 1 kilogram


2. Alicia and Jeremy weigh a cell phone on a digital scale. They write down 113 but forget to record the unit. Which unit of measurement is correct? How do you know?

113 grams. 113 kilograms would be very heavy!


3. Read and write the weights below. Write the word *kilogram* or *gram* with the measurement.



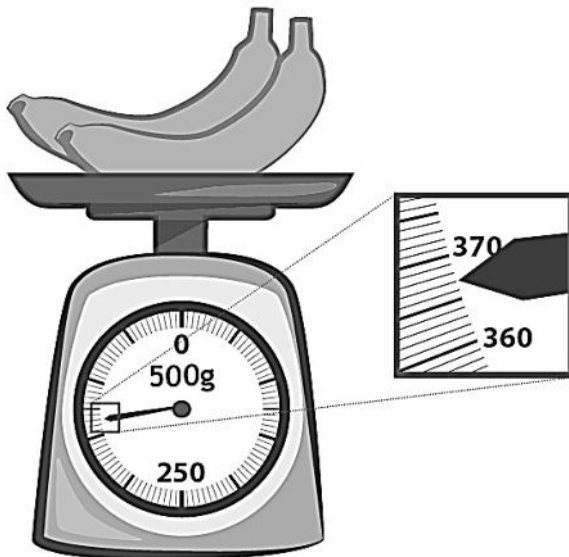
25 kilograms



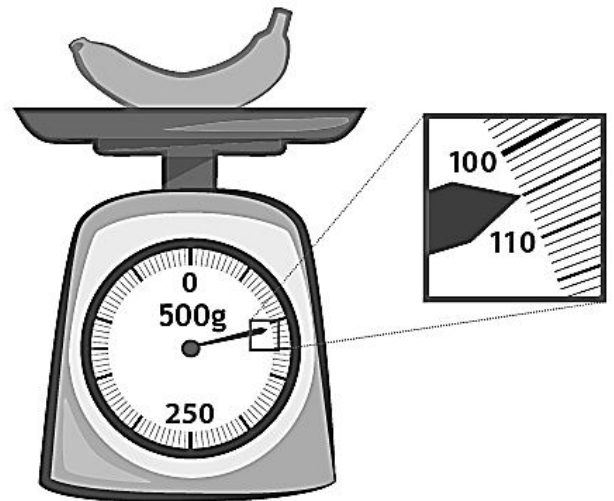
9 kilograms



200 grams



367 grams



105 grams