

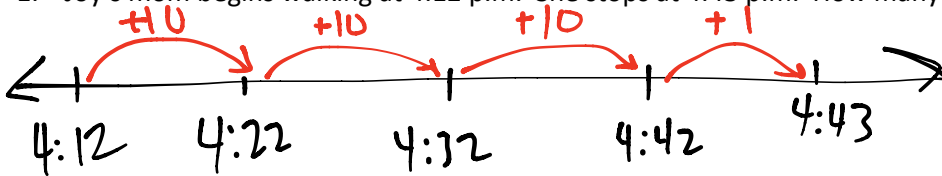
Name _____

Date _____

Record your homework start time on the clock in Problem 6.

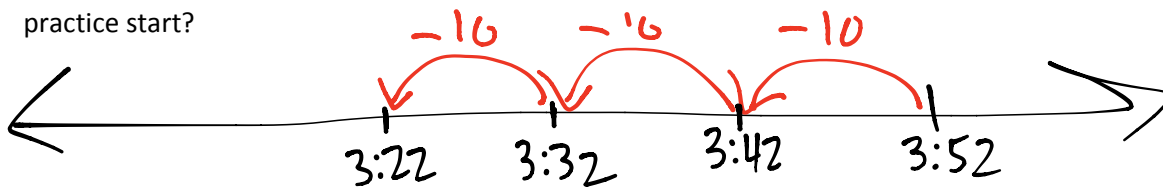
Directions: Use a number line to answer Problems 1 through 4.

1. Joy’s mom begins walking at 4:12 p.m. She stops at 4:43 p.m. How many minutes does she walk?



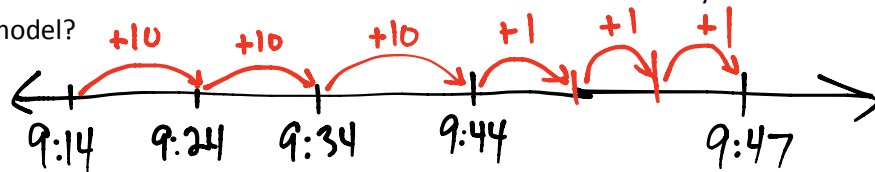
Joy’s mom walks for 31 minutes.

2. Cassie finishes softball practice at 3:52 p.m. after practicing for 30 minutes. What time does Cassie’s practice start?



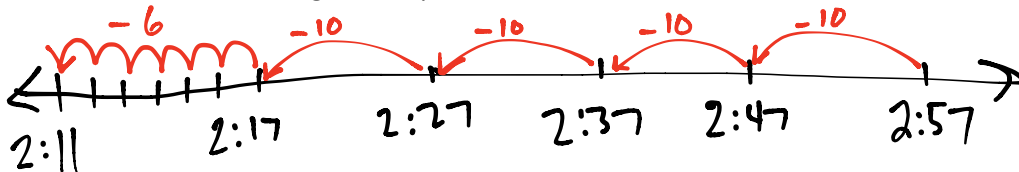
Cassie’s practice starts at 3:22.

3. Jordie builds a model from 9:14 a.m. to 9:47 a.m. How many minutes does Jordie spend building his model?



Jordie builds for 33 minutes.

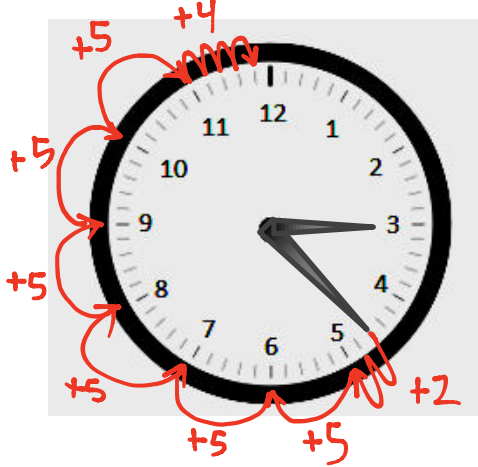
4. Cara finishes reading at 2:57 p.m. She reads for a total of 46 minutes. What time did Cara start reading?



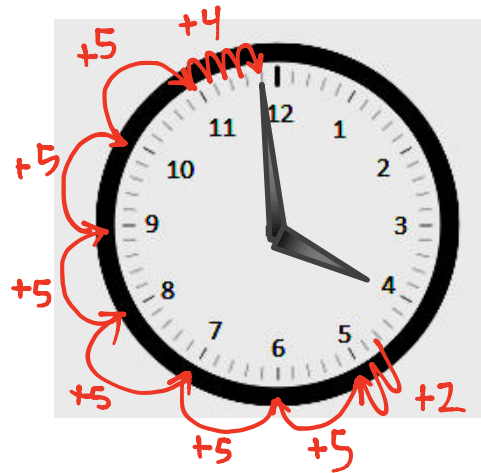
Cara starts reading at 2:11 p.m.

5. Jenna and her mom take the bus to the mall. The clocks below show when they leave their house and when they arrive at the mall. How many minutes does it take them to get to the mall?

Time when they leave home:

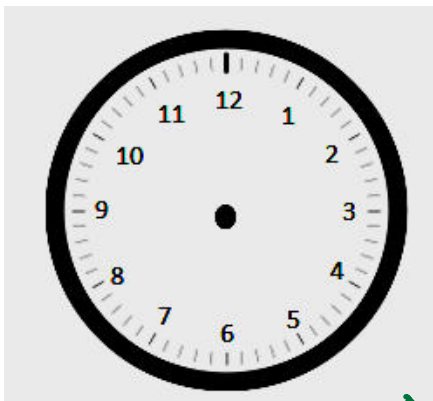


Time when they arrive at the mall:

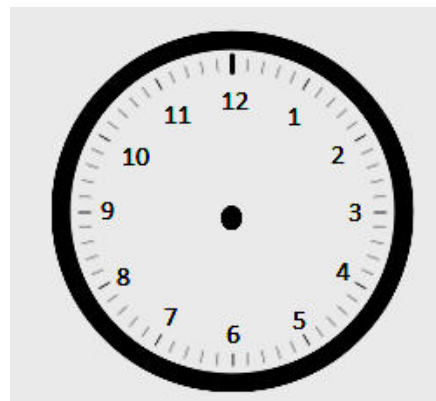


36 min

6. Record your homework start time:



- Record the time you finish Problems 1–5:



Answers will vary.

How many minutes did you work on Problems 1–5?