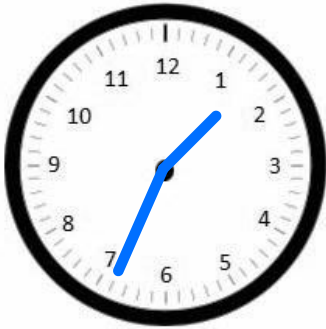


Name _____

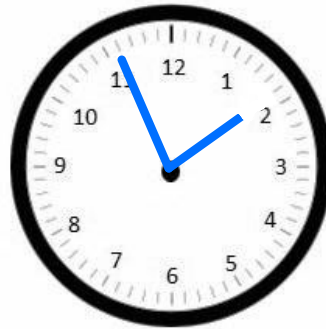
Date _____

Independent reading time starts at 1:34 p.m. It ends at 1:56 p.m.

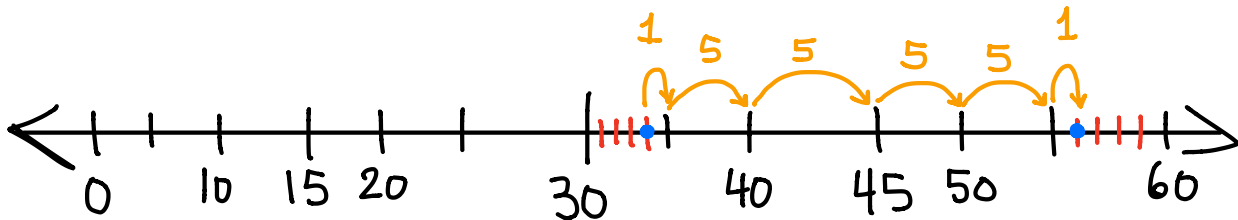
1. Draw the start time on the clock below.



2. Draw the end time on the clock below.



3. How many minutes does independent reading time last?



Independent reading time takes 22 minutes.