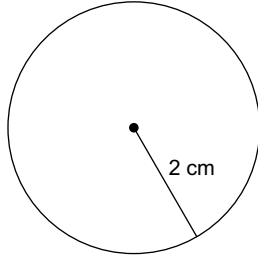


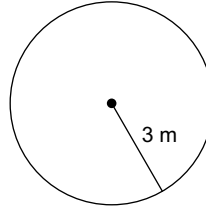
# Circumference and Area

**Find the circumference of each circle. Give two answers: 1) in terms of  $\pi$  and 2) use 3.14 to approximate.**

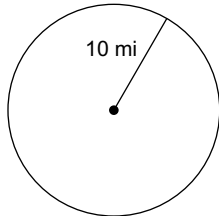
1)



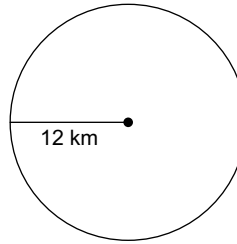
2)



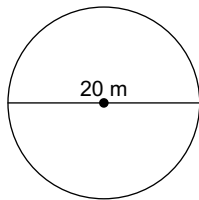
3)



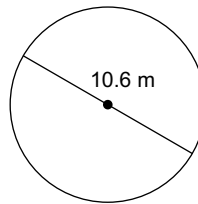
4)



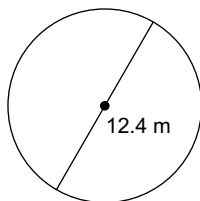
5)



6)



7)



8)

