

Ancient Greece One-Pager

Cartographer: _____ Due Date: _____ Period: _____

A. Draw a map of Greece on one-half of the back of this page. Include the following on your map:

Major cities/regions

Argos	Crete
Athens	Ephesus
Sparta	Corinth
Mycenae	Megara
Knossos	Peloponnesus


Landmarks

Mt. Olympus
Delphi
Olympia
Delos

Bodies of Water

Mediterranean Sea
Ionian Sea
Aegean Sea
Black Sea

B. Create a map key and include it on your map. Choose colors or patterns to represent the following land features. Color them on your map key, and then color your map according to your key.




Ancient Greece




Major Temples/Shrines



Mt. Olympus



Macedonia



Bodies of water

C. Write the following questions and include the answers on your map. Be sure your answers are in complete sentences!

- 1a. Describe Greece's geography.
- 1b. How did their geography help Greece prosper?
- 2a. Who were the earliest Greeks? Describe their culture.
- 2b. What two things did the Greeks learn from trading with other people?
- 3a. Describe the gods of Greece. Who was the ruler of the gods?
- 3b. How did the Greeks honor their gods?
- 4a. Describe a typical Greek city-state.
- 4b. What was an agora and what was its function in a city-state?

D. Title your map.

All information for this map project can be found in your social studies textbook, Chapter 11. Use the maps on page 351, 389 and 401. The answers for Part C can be found on pages 355-372.