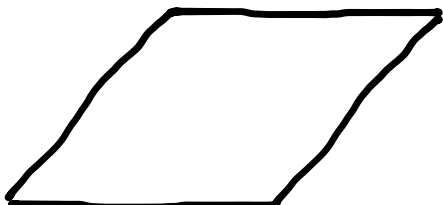



Name \_\_\_\_\_

Date \_\_\_\_\_

1. Draw a rhombus.




or




All four sides are  
of equal length.

2. Draw a rectangle.



or



Four right angles