





Name _____

Date _____

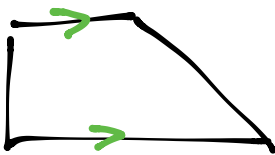
1. Draw a parallelogram.

Pictures will vary. Here are some examples.

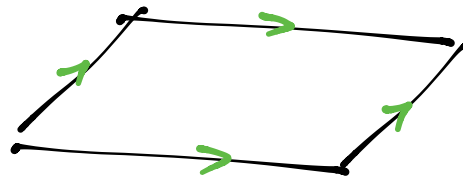


2. When is a trapezoid also called a parallelogram?

A trapezoid has at least one pair of parallel lines. So a trapezoid is also called a parallelogram when it has two pairs of parallel lines.



One pair of parallel lines.
NOT a parallelogram.



Two pairs of parallel lines. A parallelogram.