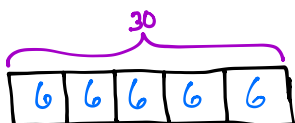


Name _____

Date _____

Solve using a tape diagram.

a. $\frac{3}{5}$ of 30 = 18

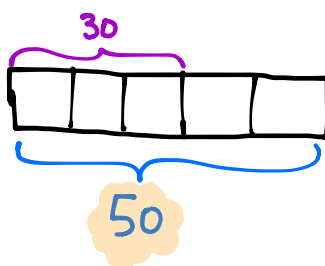


5 units = 30

1 unit = $\frac{30}{5} = 6$

3 units = $3 \times 6 = 18$

b. $\frac{3}{5}$ of a number is 30. What's the number?

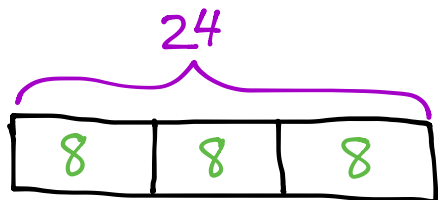


3 units = 30

1 unit = $\frac{30}{3} = 10$

5 units = $5 \times 10 = 50$

- c. Mrs. Johnson baked 2 dozen cookies. Two-thirds of the cookies were oatmeal. How many oatmeal cookies did Mrs. Johnson bake?



3 units = 24

1 unit = $\frac{24}{3} = 8$

2 units = $2 \times 8 = 16$

Mrs. Johnson baked 16 oatmeal cookies.