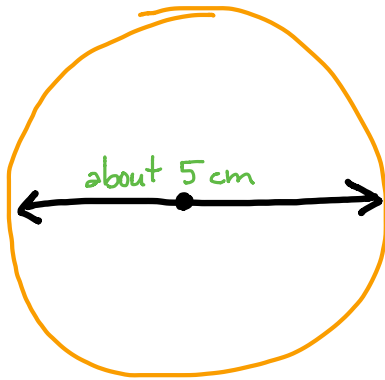


Name _____

Date _____

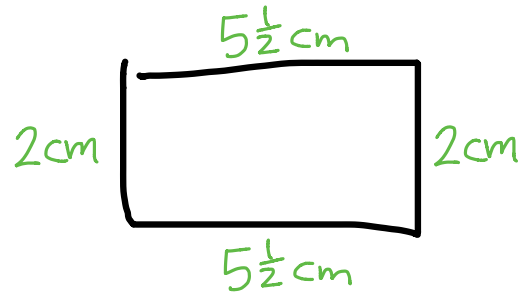
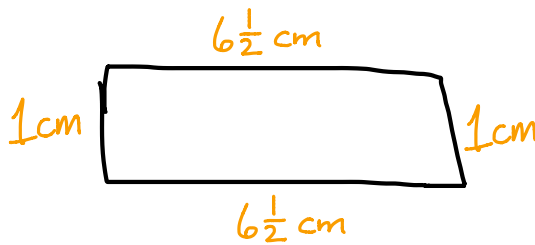
1. Use string to help you sketch a circle with a perimeter of about 15 centimeters.



The circle should have a diameter of around 5 centimeters.

2. Estimate to draw a rectangle with a perimeter of 15 centimeters. Label the width and length.

Answers will vary. Some possibilities...



Hint: the length and width will have a sum of $7\frac{1}{2}$ cm.

Solved by Duane

<http://EMBARC.online>