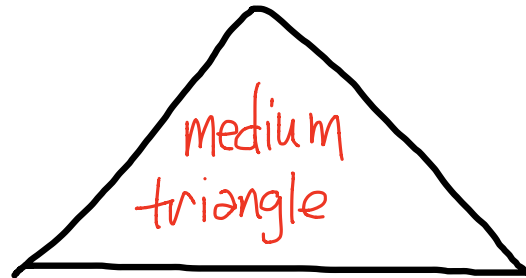

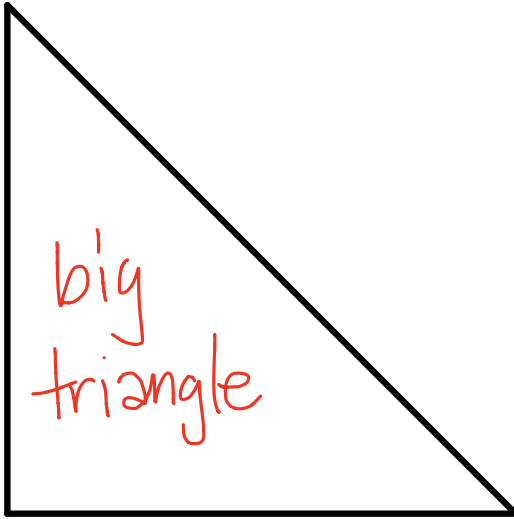


Name \_\_\_\_\_

Date \_\_\_\_\_

Choose three shapes from your tangram puzzle. Trace them below. Label the name of each shape, and describe *at least* one attribute that they have in common.



All three figures have at least one right angle.

NOTE: There are many possible solutions.

Solved by Duane <http://EMBARC.online>