


Name _____

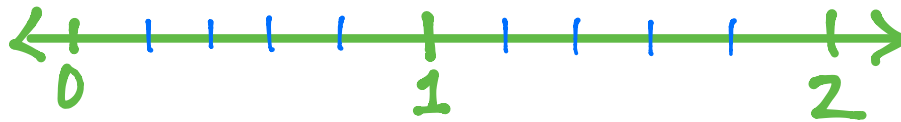
Date _____

Irene has 2 yards of fabric.

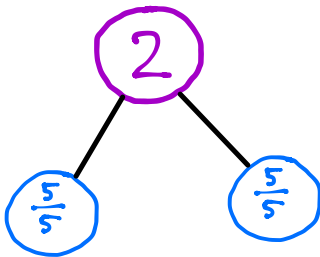
- a. Draw a number line to represent the total length of Irene's fabric.



- b. Irene cuts her fabric into pieces of $\frac{1}{5}$ yard in length. Partition the number line to show her cuts.



- c. How many $\frac{1}{5}$ -yard pieces does she cut altogether? Use number bonds with copies of wholes to help you explain.



She cuts ten $\frac{1}{5}$ -yard pieces.