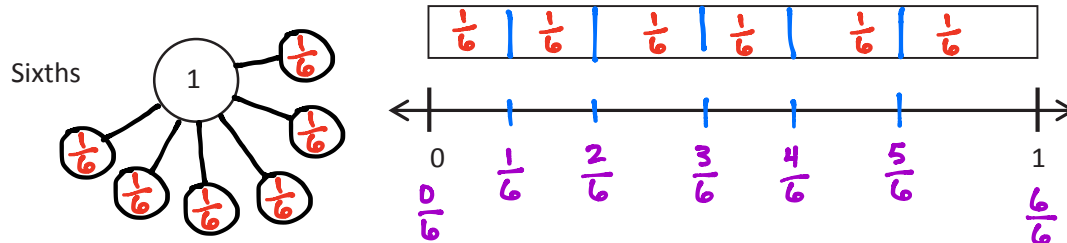


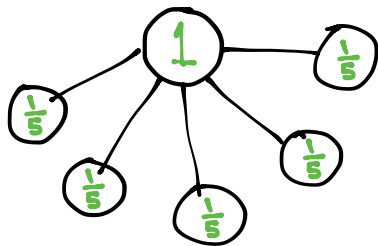
Name _____

Date _____

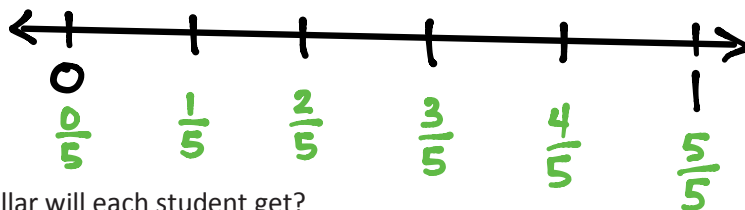
1. Draw a number bond for the fractional unit. Partition the fraction strip, and draw and label the fractions on the number line. Be sure to label the fractions at 0 and 1.



2. Ms. Metcalf wants to share \$1 equally among 5 students. Draw a number bond and a number line to help explain your answer.



We will assume only the students are sharing the \$1.



- a. What fraction of a dollar will each student get?

Each student will get $\frac{1}{5}$ of a dollar.

- b. How much money will each student get?

Each student will get 20¢.

$$\begin{array}{r} 20 \\ 5 \overline{) 100} \\ \underline{-10} \\ 00 \end{array}$$