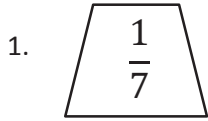



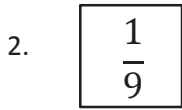
Name \_\_\_\_\_

Date \_\_\_\_\_

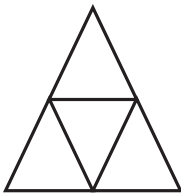
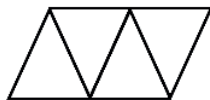
Each shape represents the unit fraction. Draw a picture representing a possible whole.



SHAPES WILL VARY



3. Aileen and Jack used the same triangle representing the unit fraction  $\frac{1}{4}$  to create 1 whole. Who did it correctly? Explain your answer.

Aileen's  
DrawingJack's  
Drawing

To create 1 whole in this case requires 4 triangles. Since they both used 4 triangles, they are both correct.