


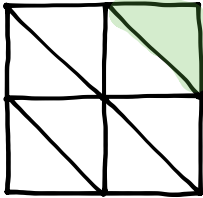


Name _____

Date _____

1. Fill in the blank with a fraction to make the statement true. Draw a matching model.

					
$\frac{1}{7}$	is less than	$\frac{1}{4}$	$\frac{1}{4}$	is greater than	$\frac{1}{8}$

2. Tatiana ate $\frac{1}{2}$ of a small carrot. Louis ate $\frac{1}{4}$ of a large carrot. Who ate more? Use words and pictures to explain your answer.

We can't determine who ate more because their "wholes" are not the same size.

$\frac{1}{2}$ of a small carrot could be smaller or larger than a large carrot.



OR

