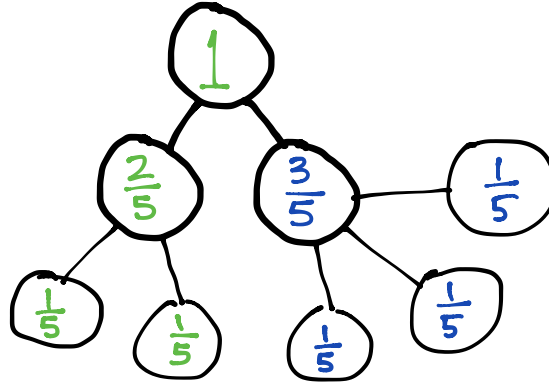
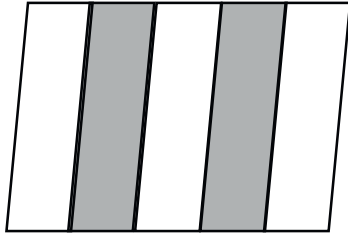


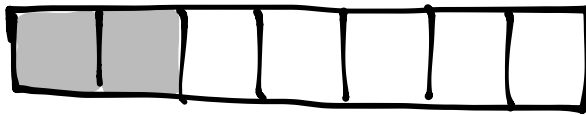
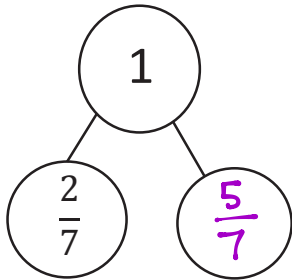
Name _____

Date _____


1. Draw a number bond that shows the shaded and the unshaded parts of the shape below. Then, show each part decomposed into unit fractions.



2. Complete the number bond. Draw a shape that has shaded and unshaded parts that match the completed number bond.



-OR-



Teachers will need to be flexible when scoring this questions since students can choose to shade either $\frac{2}{7}$ or $\frac{5}{7}$ of the shape.