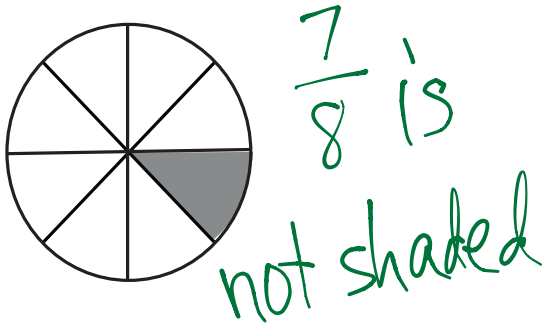


Name _____

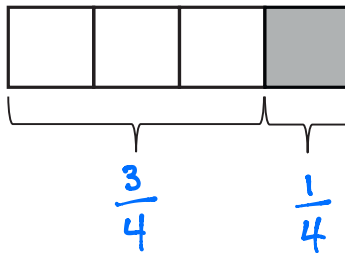
Date _____

1. Write the fraction that is not shaded.

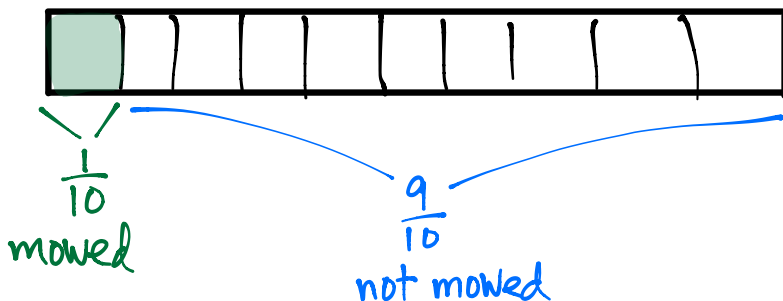
2. There are 6 sixths in 1 whole.



3. The fraction strip is 1 whole. Write fractions to label the shaded and unshaded parts.



4. Justin mows part of his lawn. Then, his lawnmower runs out of gas. He has not mowed $\frac{9}{10}$ of the lawn. What part of his lawn is mowed?



Justin mowed $\frac{1}{10}$ of the lawn.