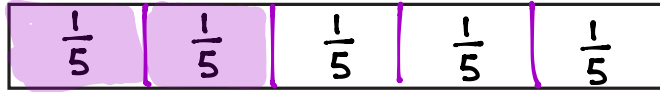


Name \_\_\_\_\_

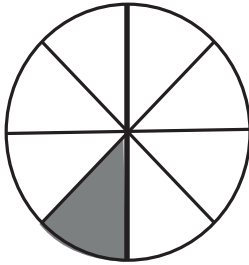
Date \_\_\_\_\_

1. Complete the number sentence. Estimate to partition the strip equally. Write the unit fraction inside each unit. Shade the answer.

$$2 \text{ fifths} = \frac{2}{5}$$



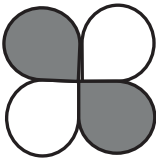
2.



a. What fraction of the circle is shaded?  $\frac{1}{8}$

b. What fraction of the circle is not shaded?  $\frac{7}{8}$

3. Complete the chart.

	Total Number of Equal Parts	Total Number of Shaded Equal Parts	Unit Fraction	Fraction Shaded
	4	2	$\frac{1}{4}$	$\frac{2}{4}$