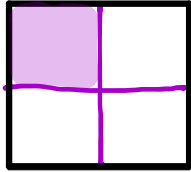


Name _____

Date _____


Each shape is 1 whole. Estimate to equally partition the shape and shade to show the given fraction.

1. 1 fourth

OR

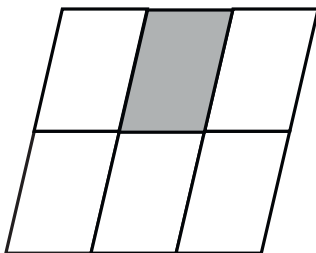
Other answers are possible.

2. 1 fifth



Teachers might consider changing this line into a tape diagram because students were not shown lines during the Concept Development.

3. The shape represents 1 whole. Write the fraction for the shaded part.

The shaded part is $\frac{1}{6}$.