

Name \_\_\_\_\_

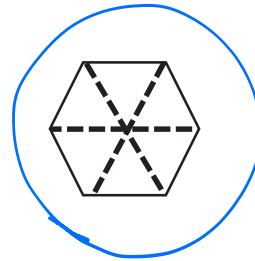
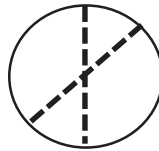
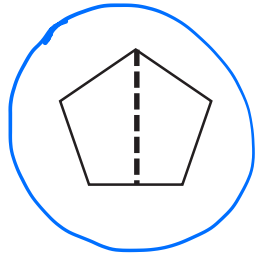
Date \_\_\_\_\_

1.

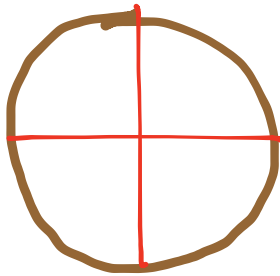


4 sevenths are shaded.

2. Circle the shapes that are divided into equal parts.



3. Steven wants to equally share his pizza with his 3 sisters. What fraction of the pizza does he and each sister receive?



Steven and each sister would each receive one fourth.

He and each sister receive one fourth