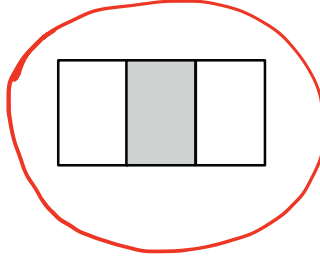





Name _____

Date _____

1. Circle the model that correctly shows $\frac{1}{3}$ shaded.

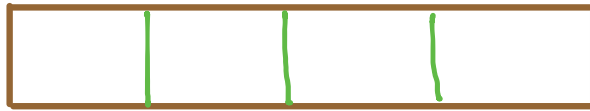


- 2.



There are 10 equal parts in all. 7 are shaded.

3. Michael bakes a piece of garlic bread for dinner. He shares it equally with his 3 sisters. Show how Michael and his 3 sisters can each get an equal share of the garlic bread.



Each person gets one fourth.