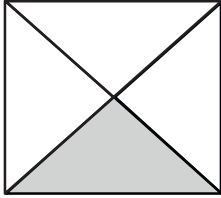


Name _____

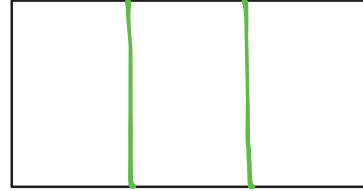
Date _____

1. Name the fraction that is shaded.

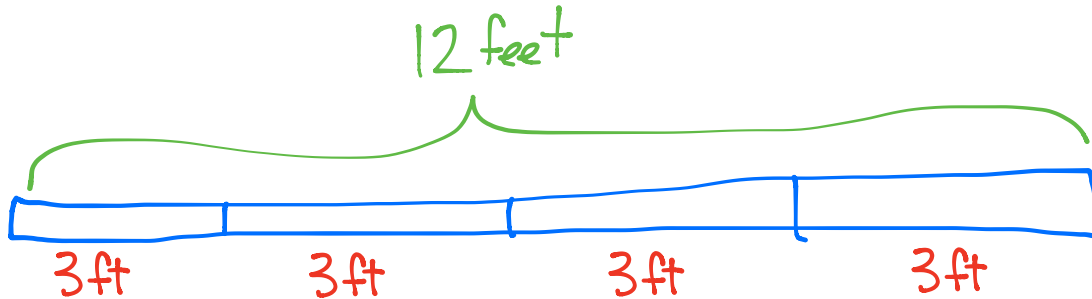


one fourth

2. Estimate to partition the rectangle into thirds.



3. A plumber has 12 feet of pipe. He cuts it into pieces that are each 3 feet in length. What fraction of the pipe would one piece represent? (Use your strip from the lesson to help you.)



Each piece is one fourth.