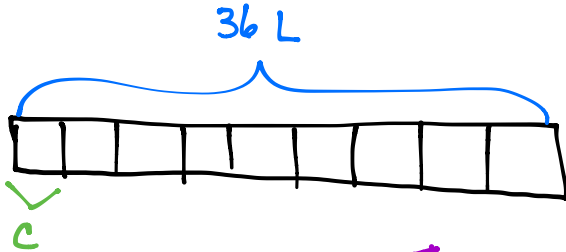


Name _____

Date _____

Use a letter to represent the unknown.

1. Mrs. Aquino pours 36 liters of water equally into 9 containers. How much water is in each container?

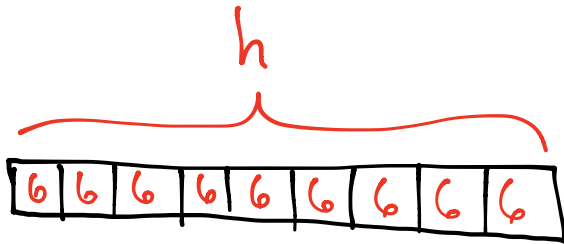


$$36 \div 9 = c$$

$$4 = c$$

There is 4L of water in each container.

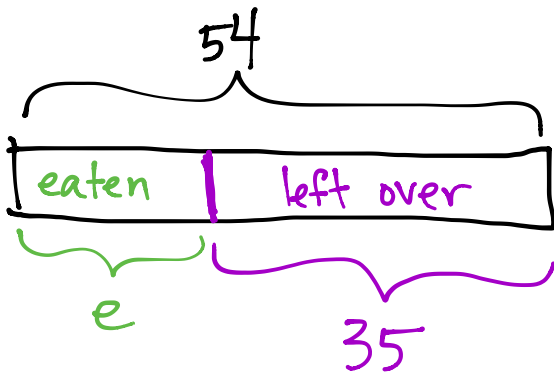
2. Marlon buys 9 packs of hot dogs. There are 6 hot dogs in each pack. After the barbeque, 35 hot dogs are left over. How many hot dogs were eaten?



$$9 \times 6 = h$$

$$54 = h$$

Marlon bought
54 hot dogs.



$$54 - 35 = e$$

$$19 = e$$

19 hot dogs were eaten.