

Name \_\_\_\_\_

Second Grade

**Snow**

**Day**

**Work**

**Day #3**

**Walnut Ridge Elementary**

**Alternative Method of Instruction Verification Form**

**Day 1** \_\_\_\_\_ **Day 2** \_\_\_\_\_ **Day 3**  **Day 4** \_\_\_\_\_ **Day 5** \_\_\_\_\_

**This form certifies that your child completed work for the designated day. This will allow your child to receive attendance credit for this day. In the event it is not completed, your child will receive an unexcused absence.**

**My child, \_\_\_\_\_ completed all work assigned for Day \_\_\_\_\_.**

**My child also worked on the following website:**

\_\_\_\_\_.

**Parent's Signature** \_\_\_\_\_ **Date** \_\_\_\_\_

# Bridges to Remember

---

*Read to find out what is special about these bridges.*


<sup>1</sup> Some people do not like to drive across bridges. They look straight ahead and try to hold their breath until they get to the other side. Good luck if those people are driving in Louisiana. There is a 24-mile-long bridge there! It takes about half an hour to get across.

<sup>2</sup> If you like to look way, way down when you cross a bridge, you should go to Colorado.

A bridge there stands more than a thousand feet above a river. A 75-story building could fit under that bridge!

<sup>3</sup> If you do not like to look down, get in the middle lane of a bridge in Australia. It has eight lanes for cars, two train tracks, a bike path, and a sidewalk.

<sup>4</sup> Finally, if you like crowds and bridges, go to India. A bridge there carries 100,000 cars and trucks every day, plus thousands of walkers.



---

**1.** How does the text help you understand how long a 24-mile-long bridge is?

\_\_\_\_\_

**2.** How does the text help you understand how high the bridge in Colorado is?

\_\_\_\_\_

\_\_\_\_\_

**3.** If you do not like to look over the side of a bridge, why would the bridge in Australia be a good one to cross?

\_\_\_\_\_

**4.** Why is the bridge in India a bridge to remember?

\_\_\_\_\_

\_\_\_\_\_

**5.** Name three things, other than cars, that cross bridges in the selection.

\_\_\_\_\_

\_\_\_\_\_

\_\_\_\_\_

**6.** What do some people do if they are nervous on a bridge?

\_\_\_\_\_



\_\_\_\_\_

# Vowel Pairs

**Directions:** Read each word in the box. Circle its vowel pair. Use each word to complete the riddle. Print the answers on the line.

drain	feel	slow	boat	rainbow
toes	bleed	tail	green	neat
doe	dream	hay		


1. A dog can wag its \_\_\_\_\_.
2. A horse eats \_\_\_\_\_.
3. In a tub, water goes down a \_\_\_\_\_.
4. If you get cut, you will \_\_\_\_\_.
5. When you sleep, you \_\_\_\_\_.
6. Mix blue and yellow to get \_\_\_\_\_.
7. Use your fingers to \_\_\_\_\_.
8. It is not messy, but \_\_\_\_\_.
9. Each foot has five \_\_\_\_\_.
10. A female deer is a \_\_\_\_\_.
11. Something that floats is a \_\_\_\_\_.
12. After a storm, you might see a \_\_\_\_\_.
13. A turtle is not fast, but \_\_\_\_\_.



# Words Ending in le

Directions: Say the name of each picture. Circle its name.

1.



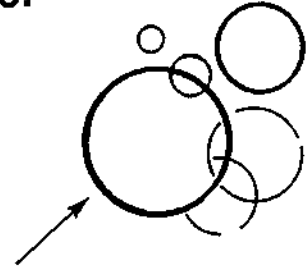
rattle rapper

2.



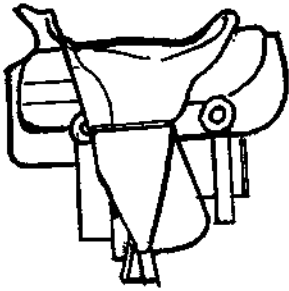
candle candy

3.




bottle bubble

4.




sadly saddle

5.




bottle bother

6.



castle cattle

7.




middle mitten

8.




nook noodle

9.




beagle better

10.



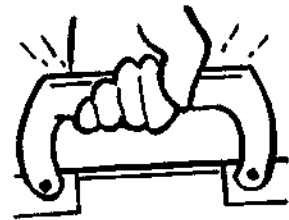
ladder ladle

11.



castle cattle

12.



handle happy

Name \_\_\_\_\_

2-Digit Addition  
No Regrouping

# 7

$$\begin{array}{r} 25 \\ + 63 \\ \hline \end{array}$$

$$\begin{array}{r} 51 \\ + 14 \\ \hline \end{array}$$

$$\begin{array}{r} 62 \\ + 17 \\ \hline \end{array}$$

$$\begin{array}{r} 12 \\ + 63 \\ \hline \end{array}$$

$$\begin{array}{r} 34 \\ + 53 \\ \hline \end{array}$$



$$\begin{array}{r} 50 \\ + 12 \\ \hline \end{array}$$

$$\begin{array}{r} 42 \\ + 26 \\ \hline \end{array}$$

$$\begin{array}{r} 11 \\ + 25 \\ \hline \end{array}$$

$$\begin{array}{r} 74 \\ + 15 \\ \hline \end{array}$$

$$\begin{array}{r} 32 \\ + 37 \\ \hline \end{array}$$



$$\begin{array}{r} 61 \\ + 21 \\ \hline \end{array}$$

$$\begin{array}{r} 86 \\ + 12 \\ \hline \end{array}$$

$$\begin{array}{r} 40 \\ + 35 \\ \hline \end{array}$$

$$\begin{array}{r} 75 \\ + 14 \\ \hline \end{array}$$

$$\begin{array}{r} 27 \\ + 31 \\ \hline \end{array}$$



Time: \_\_\_\_\_

Score: \_\_\_\_\_ / \_\_\_\_\_

1. The first part of the document discusses the importance of maintaining accurate records of all transactions.

2. It is essential to ensure that all entries are supported by appropriate documentation and receipts.

3. Regular audits should be conducted to verify the accuracy of the records and to identify any discrepancies.

4. The second part of the document outlines the procedures for handling any identified errors or irregularities.

5. It is recommended that all staff involved in the process receive appropriate training and guidance.



Name \_\_\_\_\_ Date \_\_\_\_\_

## Two-Digit Subtraction

Total Problems: 27  
Problems Correct: \_\_\_\_\_

Solve each problem.

### Use Your Subtraction Tools!

$$\begin{array}{r} 1. \quad 61 \\ - 41 \\ \hline \end{array}$$

$$\begin{array}{r} 2. \quad 39 \\ - 26 \\ \hline \end{array}$$

$$\begin{array}{r} 3. \quad 85 \\ - 43 \\ \hline \end{array}$$

$$\begin{array}{r} 4. \quad 56 \\ - 31 \\ \hline \end{array}$$

$$\begin{array}{r} 5. \quad 47 \\ - 17 \\ \hline \end{array}$$

$$\begin{array}{r} 6. \quad 87 \\ - 45 \\ \hline \end{array}$$

$$\begin{array}{r} 7. \quad 67 \\ - 52 \\ \hline \end{array}$$

$$\begin{array}{r} 8. \quad 78 \\ - 33 \\ \hline \end{array}$$

$$\begin{array}{r} 9. \quad 69 \\ - 46 \\ \hline \end{array}$$

$$\begin{array}{r} 10. \quad 96 \\ - 21 \\ \hline \end{array}$$

$$\begin{array}{r} 11. \quad 94 \\ - 71 \\ \hline \end{array}$$

$$\begin{array}{r} 12. \quad 40 \\ - 20 \\ \hline \end{array}$$

$$\begin{array}{r} 13. \quad 70 \\ - 20 \\ \hline \end{array}$$

$$\begin{array}{r} 14. \quad 98 \\ - 31 \\ \hline \end{array}$$

$$\begin{array}{r} 15. \quad 58 \\ - 18 \\ \hline \end{array}$$

$$\begin{array}{r} 16. \quad 38 \\ - 15 \\ \hline \end{array}$$

$$\begin{array}{r} 17. \quad 65 \\ - 12 \\ \hline \end{array}$$

$$\begin{array}{r} 18. \quad 88 \\ - 62 \\ \hline \end{array}$$

$$\begin{array}{r} 19. \quad 26 \\ - 24 \\ \hline \end{array}$$

$$\begin{array}{r} 20. \quad 70 \\ - 20 \\ \hline \end{array}$$

$$\begin{array}{r} 21. \quad 82 \\ - 51 \\ \hline \end{array}$$

$$\begin{array}{r} 22. \quad 62 \\ - 20 \\ \hline \end{array}$$

$$\begin{array}{r} 23. \quad 98 \\ - 34 \\ \hline \end{array}$$

$$\begin{array}{r} 24. \quad 88 \\ - 12 \\ \hline \end{array}$$

$$\begin{array}{r} 25. \quad 45 \\ - 35 \\ \hline \end{array}$$

$$\begin{array}{r} 26. \quad 67 \\ - 45 \\ \hline \end{array}$$

$$\begin{array}{r} 27. \quad 19 \\ - 15 \\ \hline \end{array}$$

